


TA
545
G97


LIBRARY OF CONGRESS.

Chap. THEA 5 Copyright No.

Shelf G97

UNITED STATES OF AMERICA.





A

COMPLETE KEY

TO

GUMMERE'S SURVEYING;

IN WHICH

THE OPERATIONS OF ALL THE EXAMPLES NOT SOLVED IN
THAT WORK ARE EXHIBITED AT LARGE.

PRINCIPALLY DESIGNED

TO FACILITATE THE LABOUR OF TEACHERS,

AND TO ASSIST THOSE

WHO HAVE NOT THE OPPORTUNITY OF THEIR INSTRUCTION.

By SAMUEL ALSOP.

ADAPTED TO THE REVISED EDITION OF THE SURVEYING

By ISAAC SHARPLESS,

AUTHOR OF "A TEXT-BOOK OF GEOMETRY AND TRIGONOMETRY."



PHILADELPHIA:

PORTER & COATES.

(1884)

Copyright, 1884,
BY PORTER & COATES.

7A545
.G97

6-265

K E Y

TO

GUMMERE'S SURVEYING.

PLANE TRIGONOMETRY.

CASE 1.

EXAMPLE 3. (Pl. 1, fig. 1.)

Angle $C=180^\circ-A-B=46^\circ 15'$.

As sin. A $79^\circ 23'$	- - - - -	Ar. Co.	0.007499
Is to sin. B $54^\circ 22'$	- - - - -		9.909963
So is BC 125	- - - - -		2.096910
			2.014372
To AC 103.4	- - - - -		2.014372

Again,

As sin. A	- - - - -	Ar. Co.	0.007499
Is to sin. C $46^\circ 15'$	- - - - -		9.858756
So is BC	- - - - -		2.096910
			1.963165
To AB 91.87	- - - - -		1.963165

EXAMPLE 4. (Pl. 1, fig. 2.)

Angle $C=90^\circ-A=33^\circ 12'$.

As sin. C $33^\circ 12'$	- - - - -	Ar. Co.	0.261566
Is to sin. B 90	- - - - -		10.000000
So is AB 53.66	- - - - -		1.729651
			1.991217
To AC 98	- - - - -		1.991217
As sin. C	- - - - -	Ar. Co.	0.261566
Is to sin. A $56^\circ 48'$	- - - - -		9.922603
So is AB	- - - - -		1.729651
			1.913820
To BC 82	- - - - -		1.913820

EXAMPLE 5. (Pl. 1, fig. 2.)

Angle $C=90^\circ-A=50^\circ 50'$.

As sin. A $39^\circ 10'$	- - - - -	Ar. Co.	0.199573
Is to sin. B 90°	- - - - -	- - -	10.000000
So is BC 407.37	- - - - -	- - -	2.609989
To AC 645	- - - - -	- - -	<u>2.809562</u>
As sin. A	- - - - -	Ar. Co.	0.199573
Is to sin. C $50^\circ 50'$	- - - - -	- - -	9.889477
So is BC	- - - - -	- - -	2.609989
To AB 500.1	- - - - -	- - -	<u>2.699039</u>

CASE 2.

EXAMPLE 3. (Pl. 1, fig. 1.)

As AC 306	- - - - -	Ar. Co.	7.514278
Is to AB 274	- - - - -	- - -	2.437751
So is sin. B $78^\circ 13'$	- - - - -	- - -	9.990750
To sin. C	- - 61 14	- - - - -	<u>9.942779</u>
	<u>139 27</u>		
	180		
A	<u>40 33</u>		

As sin. B $78^\circ 3'$	- - - - -	Ar. Co.	0.009515
Is to sin. A $40^\circ 33'$	- - - - -	- - -	9.812988
So is AC 306	- - - - -	- - -	2.485721
To BC 203.4	- - - - -	- - -	<u>2.308224</u>

EXAMPLE 4. (Pl. 1, fig. 2.)

As AC 272	- - - - -	Ar. Co.	7.565431
Is to AB 232	- - - - -	- - -	2.365488
So is sin. B 90°	- - - - -	- - -	10.000000
To sin. C	- - 58° 32'	- - - - -	<u>9.930919</u>
A	<u>31° 28'</u>		

As sin. B	- - - - -	Ar. Co.	0.000000
Is to sin. A	31° 28'	- - - - -	9.717673
So is AC	- - - - -	- - - - -	2.434569
To BC	142	- - - - -	<u>2.152242</u>

EXAMPLE 5. (Pl. 1, fig. 2.)

As AC	150	- - - - -	Ar. Co.	7.823909
Is to BC	69	- - - - -	- - - - -	1.838849
So is sin. B	90°	- - - - -	- - - - -	10.000000
To sin. A	27° 23'	- - - - -	- - - - -	<u>9.662758</u>
C	<u>62° 37'</u>			

As sin. B	- - - - -	Ar. Co.	0.000000
Is to sin. C	62° 37'	- - - - -	9.948388
So is AC	- - - - -	- - - - -	<u>2.176091</u>
To AB	133.2	- - - - -	<u>2.124479</u>

CASE 3.

EXAMPLE 2. (Pl. 1, fig. 3.)

$$\frac{A+C}{2} = \frac{180^\circ - B}{2} = 39^\circ 15'$$

As AB+BC	185	- - - - -	Ar. Co.	7.732828
Is to AB-BC	33	- - - - -	- - - - -	1.518514
So is tang.	$\frac{C+A}{2}$	39° 15'	- - - - -	<u>9.912240</u>
To tang.	$\frac{C-A}{2}$	8° 18'	- - - - -	<u>9.163582</u>
C	<u>47° 33'</u>			

As sin. A	30° 57'	- - - - -	Ar. Co.	0.288792
Is to sin. B	101° 30'	- - - - -	- - - - -	9.991193
So is BC	76	- - - - -	- - - - -	<u>1.880814</u>
To AC	144.8	- - - - -	- - - - -	<u>2.160799</u>

EXAMPLE 3. (Pl. 1, fig. 2.)

$$\frac{C+A}{2} = \frac{180^\circ - B}{2} = 45^\circ$$

As AB+BC 1677	- - - - -	Ar. Co.	6.775467
Is to AB-BC 103	- - - - -		2.012837
So is tang. $\frac{C+A}{2}$	- - 45° - - - - -		<u>10.000000</u>
To tang. $\frac{C-A}{2}$	- - 3° 31' - - - - -		<u>8.788304</u>
	C - - 48° 31'		<u><u> </u></u>
As sin. A 41° 29'	- - - - -	Ar. Co.	0.178878
Is to sin. B 90	- - - - -		10.000000
So is BC 787	- - - - -		<u>2.895975</u>
To AC 1188	- - - - -		<u><u>3.074853</u></u>

CASE 4.

RULE 2.

EXAMPLE 2. (Pl. 1, fig. 4.)

AC	47				
AB	64	Ar. Co.		8.193820	
BC	34	Ar. Co.		8.468521	
	<u> </u>				
	2)145				
	<u> </u>				
Half sum	72.5	- - - - -		1.860338	
	<u> </u>				
Difference	25.5	- - - - -		1.406540	
				<u> </u>	
				2)19.929219	
				<u> </u>	
Cos. $\frac{1}{2}$ B	22° 49'	- - - - -		9.964609	
	<u> </u>			<u> </u>	
	B	45° 38'		<u> </u>	

EXAMPLE 3. (Pl. 1, fig. 4.)

AB	108				
BC	54	Ar. Co.		8.267606	
AC	88	Ar. Co.		8.055517	
	<u> </u>				
	2)250				
	<u> </u>				
Half sum	125	- - - - -		2.096910	
	<u> </u>				
Difference	17	- - - - -		1.230449	
				<u> </u>	
				2)19.650482	
				<u> </u>	
Cos. $\frac{1}{2}$ C	48° 2'	- - - - -		9.825241	
	<u> </u>			<u> </u>	
	C	96° 4'		<u> </u>	

RIGHT ANGLED TRIANGLES.

First Method.

EXAMPLE 2. (Pl. 1, fig. 5.)

Making AC radius, CB is sine of A, and AB is cos. A; hence,

As radius - - - - -	Ar. Co.	0.000000
Is to sin. A $27^{\circ} 46'$ - - - - -		9.668267
So is AC 36.57 - - - - -		<u>1.563125</u>
To BC 17.04 - - - - -		<u><u>1.231392</u></u>

And,

As radius - - - - -	Ar. Co.	0.000000
Is to cos. A - - - - -		9.946871
So is AC - - - - -		<u>1.563125</u>
To AB 32.36 - - - - -		<u><u>1.509996</u></u>

EXAMPLE 3. (Pl. 1, fig. 5.)

Making AC radius, we have CB the sine, and AB the cosine of A; hence,

As sin. A $42^{\circ} 9'$ - - - - -	Ar. Co.	0.173230
Is to radius - - - - -		10.000000
So is BC 193.6 - - - - -		<u>2.286905</u>
To AC 288.5 - - - - -		<u><u>2.460135</u></u>

And,

As sin. A - - - - -	Ar. Co.	0.173230
Is to cos. A - - - - -		9.870047
So is BC - - - - -		<u>2.286905</u>
To AB 213.9 - - - - -		<u><u>2.330182</u></u>

EXAMPLE 4. (Pl. 1, fig. 6.)

Making the base AB radius, we have BC the tangent of A; making AC the radius, we have AB the cosine of A; hence,

As AB 46.72 - - - - -	Ar. Co.	8.330497
Is to BC 57.9 - - - - -		1.762679
So is rad. - - - - -		<u>10.000000</u>
To tang. A $51^{\circ} 6'$ - - - - -		<u><u>10.093176</u></u>

And,

As cos. A - - - - -	Ar. Co.	0.202066
Is to rad. - - - - -		10.000000
So is AB - - - - -		<u>1.669503</u>
To AC 74.4 - - - - -		<u><u>1.871569</u></u>

Second Method.—By Logarithms.

EXAMPLE 3.

Hypothenuse	403				
Base	321				
Sum	724	log.	2.859739		
Difference	82	"	1.913814		
				2)4.773553	
Perpendicular	243.65				<u>2.386776</u>

EXAMPLE 4.

Perpendicular	27.2	log.	1.434569		
					2.869138
Base	31.04		1.491922		1.491922
	23.835		1.377216		
	54.875				1.739374
					2)3.231296
Hypothenuse	41.27				<u>1.615648</u>

APPLICATION OF PLANE TRIGONOMETRY TO THE MENSURATION OF DISTANCES AND HEIGHTS.

EXAMPLE 1. (See fig. 54, *Surveying*.)

Angle C = 180° — A — B = 56° 23'.

To find AC:

As sin. C	56° 23'	-	-	-	-	-	-	-	-	Ar. Co.	0.079480
Is to sin. B	49° 23'	-	-	-	-	-	-	-	-		9.880289
So is AB	500 yards	-	-	-	-	-	-	-	-		<u>2.698970</u>
To AC	455.8	-	-	-	-	-	-	-	-		<u>2.658739</u>

To find BC:

As $\sin. C$	- - - - -	Ar. Co.	0.079480
Is to $\sin. A$	$74^\circ 14'$	- - - - -	9.983345
So is AB	- - - - -	- - - - -	<u>2.698970</u>
To BC	577.8	- - - - -	<u><u>2.761795</u></u>

EXAMPLE 2. (Fig. 55, *Surveying*.)

As BC+AC	1575	- - - - -	Ar. Co.	6.802719
Is to BC-AC	105	- - - - -	- - - - -	2.021189
So is tang.	$\frac{A+B}{2}$	$62^\circ 10'$	- - - - -	<u>10.277379</u>
To tang.	$\frac{A-B}{2}$	$7^\circ 12'$	- - - - -	<u>9.101287</u>
B	- -	<u><u>$54^\circ 58'$</u></u>		

As $\sin. B$	- - - - -	Ar. Co.	0.086813
Is to $\sin. C$	$55^\circ 40'$	- - - - -	9.916859
So is AC	735	- - - - -	<u>2.866287</u>
To AB	741.2	- - - - -	<u><u>2.869959</u></u>

EXAMPLE 3. (Fig. 56, *Surveying*.)

$$\text{Angle CAD} = 180 - \text{ADC} - \text{ACD} = 31^\circ 10'$$

To find AC:

As $\sin. CAD$	$31^\circ 10'$	- - - - -	Ar. Co.	0.286065
Is to $\sin. ADC$	$53^\circ 30'$	- - - - -	- - - - -	9.905179
So is CD	300	- - - - -	- - - - -	<u>2.477121</u>
To AC	465.98	- - - - -	- - - - -	<u><u>2.668365</u></u>

$$\text{Angle CBD} = 180 - \text{BCD} - \text{BDC} = 22^\circ 55'$$

To find CB:

As $\sin. CBD$	$22^\circ 55'$	- - - - -	Ar. Co.	0.409613
Is to $\sin. CDB$	$98^\circ 45'$	- - - - -	- - - - -	9.994916
So is CD	- - - - -	- - - - -	- - - - -	<u>2.477121</u>
To CB	761.47	- - - - -	- - - - -	<u><u>2.881650</u></u>

To find AB:

As BC+AC	1227.45	- - - - -	Ar. Co.	6.910995
Is to BC—AC	295.49	- - - - -		2.470542
So is tang.	$\frac{CAB+CBA}{2}$	- 71° 30'	- - - - -	10.475480
To tang.	$\frac{CAB-CBA}{2}$	- 35° 44'	- - - - -	9.857017
	CBA	- 35° 46'		
<hr style="width: 50%; margin: 0 auto;"/>				
As sin CBA	- - - - -		Ar. Co.	0.233226
Is to sin. BCA	37°	- - - - -		9.779463
So is CA	465.98	- - - - -		2.668367
To AB	479.8	- - - - -		2.681056

EXAMPLE 4. (Fig. 57, *Surveying*.)

To find C:

AB	3			
AC	2	- - - - -	Ar. Co.	9.698970
BC	1.8	- - - - -	Ar. Co.	9.744727
	<hr style="width: 50%; margin: 0 auto;"/>			
	2)6.8			
	<hr style="width: 50%; margin: 0 auto;"/>			
Half sum	3.4	- - - - -		0.531479
	<hr style="width: 50%; margin: 0 auto;"/>			
Difference	.4	- - - - -		-1.602060
				<hr style="width: 50%; margin: 0 auto;"/>
				2)19.577236
				<hr style="width: 50%; margin: 0 auto;"/>
Cos. $\frac{1}{2}$ C	- 52° 4'	- - - - -		9.788618
	<hr style="width: 50%; margin: 0 auto;"/>			
C	- 104° 8'			

To find BD:

As sin. D	17° 47'	- - - - -	Ar. Co.	0.515105
Is to sin. C	104° 8'	- - - - -		9.986651
So is BC	1.8	- - - - -		0.255273
To BD	5.715	- - - - -		0.757029

To find CD:

As sin. D	- - - - -	Ar. Co	0.515105
Is to sin. DBC	58° 5'	- - - - -	9.928815
So is BC	- - - - -	- - - - -	0.255273
To CD	5.003	- - - - -	<u>0.699193</u>

EXAMPLE 5. (Fig. 58, *Surveying*.)

To find BAC:

BC	7.2		
AB	12	- - - -	Ar. Co. 8.920819
AC	8	- - - -	Ar. Co. 9.096910
	<u>27.2</u>		
Half sum	13.6	- - - -	1.133539
Difference	6.4	- - - -	0.806180
			<u>2)19.957448</u>
Cos. $\frac{1}{2}$ BAC	17° 47' $\frac{1}{2}$	- - - -	<u>9.978724</u>
BAC	<u>35° 35'</u>		

To find AE:

As sin. AEB	136°	- - - -	Ar. Co. 0.158229
Is to sin. EBA	19°	- - - -	9.512642
So is AB	12	- - - -	1.079181
To AE	5.624	- - - -	<u>0.750052</u>

To find ACE:

As AC+AE	13.624	- - - -	Ar. Co. 8.865696
Is to AC-AE	2.376	- - - -	0.375846
So is tang.	$\frac{AEC+ACE}{2}$	84° 42' $\frac{1}{2}$	<u>11.033291</u>
To tang.	$\frac{AEC-ACE}{2}$	62 1 $\frac{1}{2}$	<u>10.274833</u>
	AEC	- 146 44	
	ACE	- <u>22° 41'</u>	

To find AD:

As sin. ADC 19°	- - - - -	Ar. Co.	0.487358
Is to sin. ACD 22° 41'	- - - - -		9.586179
So is AC 8	- - - - -		0.903090
			<u> </u>
To AD 9.476	- - - - -		<u>0.976627</u>

To find CD:

As sin. ADC	- - - - -	Ar. Co.	0.487358
Is to sin. DAC 138° 19'	- - - - -		9.822830
So is AC	- - - - -		0.903090
			<u> </u>
To DC 16.34	- - - - -		<u>1.213278</u>

To find BD:

As sin. ADB 44°	- - - - -	Ar. Co.	0.158229
Is to sin. BAD 102° 44'	- - - - -		9.989186
So is AB 12	- - - - -		1.079181
			<u> </u>
To DB 16.85	- - - - -		<u>1.226596</u>

EXAMPLE 6. (Fig. 59, *Surveying*.)

To find ABC:

AC	46		
AB	50	Ar. Co.	8.301030
BC	40	Ar. Co.	8.397940
	<u> </u>		
	2)136		
	<u> </u>		
Half sum	68	- - - - -	1.832509
	<u> </u>		
Difference	22	- - - - -	1.342423
	<u> </u>		
			<u> </u>
			2)19.873902
			<u> </u>
Cos. $\frac{1}{2}$ ABC	30° 8'	- - - - -	9.936951
	<u> </u>		
ABC	60° 16'		<u> </u>

To find CD and CE:

As sin. ADC 60° 16'	- - - - -	Ar. Co.	0.061309
Is to radius	- - - - -		10.000000
So is AC 46	- - - - -		<u>1.662758</u>
To CD	- - 52.98	- - - - -	<u>1.724067</u>

$$CE = \frac{1}{2} CD = \underline{\underline{26.49}}$$

Also CAE = 90° - ADC = 90° - ABC = 29° 44'.

EXAMPLE 7. (Fig. 61, *Surveying*.)

Making DE radius, EC is tangent of D; hence,

As radius	- - - - -	Ar. Co.	0.000000
Is to tang. D 47° 30'	- - - - -		10.037948
So is DE 100	- - - - -		<u>2.000000</u>
To EC	- 109.13	- - - - -	<u>2.037948</u>
EB	- 5		
BC	- <u>114.13</u>		

EXAMPLE 8. (Fig. 62, *Surveying*.)

To find DC:

As sin. ACD 25°	- - - - -	Ar. Co.	0.374052
Is to sin. CAD 26° 30'	- - - - -		9.649527
So is AD 75 ft.	- - - - -		<u>1.875061</u>
To DC 79.18 ft.	- - - - -		<u>1.898640</u>

To find BC:

As radius	- - - - -	Ar. Co.	0.000000
Is to sin. CDB 51° 30'	- - - - -		9.893544
So is CD	- - - - -		<u>1.898640</u>
To CB 61.97 ft.	- - - - -		<u>1.792184</u>

EXAMPLE 9. (Fig. 63, *Surveying*.)

To find DC:

As sin. ACD 23° 50'	- - - - -	Ar. Co.	0.393535
Is to sin. CAD 44°	- - - - -		9.841771
So is AD 134	- - - - -		<u>2.127105</u>
To DC 230.4	- - - - -		<u>2.362411</u>

To find CE:

As sin. CED 141°	- - - - -	Ar. Co.	0.201128
Is to sin. CDE 16° 50'	- - - - -		9.461782
So is CD	- - - - -		<u>2.362411</u>
To CE 106	- - - - -		<u><u>2.025321</u></u>

To find EB:

As radius	- - - - -	Ar. Co.	0.000000
Is to sin. CDB 67° 50'	- - - - -		9.966653
So is CD	- - - - -		<u>2.362411</u>
To CB	- - 213.3	- - - - -	<u><u>2.329064</u></u>
CE	- - 106		
BE	- - <u>107.3</u>		

EXAMPLE 10. (Fig. 64, *Surveying*.)

To find BD:

As sin. CDB 17° 15'	- - - - -	Ar. Co.	0.527914
Is to sin. BCD 23° 45'	- - - - -		9.605032
So is CB 60	- - - - -		<u>1.778151</u>
To BD 81.49	- - - - -		<u><u>1.911097</u></u>

To find AD:

As BD+BA 121.49	- - - - -	Ar. Co.	7.915460
Is to BD-BA 41.49	- - - - -		1.617943
So is tang. $\frac{BAD+BDA}{2}$	- 69° 30'	- - - - -	<u>10.427262</u>
To tang. $\frac{BAD-BDA}{2}$	- 42° 25'	- - - - -	<u><u>9.960665</u></u>
BDA	- <u>27° 5'</u>		

As sin. ADB 27° 5'	- - - - -	Ar. Co.	0.341716
Is to sin. ABD 41°	- - - - -		9.816943
So is AB 40	- - - - -		<u>1.602060</u>
To AD 57.64	- - - - -		<u><u>1.760719</u></u>

EXAMPLE 11. (Fig. 65, *Surveying*.)

To find AD:

As sin. CAD 27° - - - - - Ar. Co. 0.342953Is to sin. ACD 138° - - - - - 9.825511So is CD 132 - - - - - 2.120574To AD - - - - - 2.289038

To find AB:

As sin. ABD 109° - - - - - Ar. Co. 0.024330Is to sin. ADB 8° - - - - - 9.143555So is AD - - - - - 2.289038To AB 28.64 - - - - - 1.456923

PRACTICAL QUESTIONS.

EXAMPLE 1. (Pl. 1, fig. 2.)

Making AB radius, BC is tangent of A.

As radius - - - - -	Ar. Co.	0.000000
Is to tang. A $52^{\circ} 30'$ - - - - -		10.115020
So is AB 85 - - - - -		<u>1.929419</u>
To BC 110.8 - - - - -		<u><u>2.044439</u></u>

EXAMPLE 2. (Pl. 1, fig. 2.)

Make AB radius, then will BC be the tangent of A; making AC radius, AB will be the cosine of A; hence,

As radius - - - - -	Ar. Co.	0.000000
Is to tang. A $61^{\circ} 45'$ - - - - -		10.269767
So is AB 73 - - - - -		<u>1.863323</u>
To BC 135.9 - - - - -		<u><u>2.133090</u></u>

And,

As cosine A - - - - -	Ar. Co.	0.324845
Is to radius - - - - -		10.000000
So is AB - - - - -		<u>1.863323</u>
To AC 154.2 - - - - -		<u><u>2.188168</u></u>

EXAMPLE 3. (Pl. 1, fig. 7.)

To find BD. We have in the triangle ABD, the angles and side AB. Hence,

As sin. ADB 31° - - - - -	Ar. Co.	0.288161
Is to sin. BAD 100° - - - - -		9.993351
So is AB 339 - - - - -		<u>2.530200</u>
To BD 648.2 - - - - -		<u><u>2.811712</u></u>

Again, in ABC we have the angles, and side AB, to find BC. Thus,

As sin. ACB $22^{\circ} 30'$	- - - -	Ar. Co.	0.417160
Is to sin. BAC $36^{\circ} 30'$	- - - -		9.774388
So is AB 339	- - - -		2.530200
To BC 526.9	- - - -		2.721748

In DBC we have the sides DB and BC, and included angle DBC= 72° . To find the side DC. Thus

$$BCD + BDC = 180^{\circ} - 72^{\circ} = 108^{\circ}.$$

Then,

As BD+BC 1175.1	- - - -	Ar. Co.	6.929925
Is to BD-BC 121.3	- - - -		2.083861
So is tang. $\frac{BCD+BDC}{2}$	- 54° - - - -		10.138739
To tang. $\frac{BCD-BDC}{2}$	- $8^{\circ} 5'$ - - - -		9.152525
	<u>BDC</u>		<u>$45^{\circ} 55'$</u>

And,

As sin. BDC $45^{\circ} 55'$	- - - -	Ar. Co.	0.143677
Is to sin. DBC 72°	- - - -		9.978206
So is BC - - - -	- - - -		2.721748
To CD 697.64	- - - -		2.843631

This example might have been solved by finding $AD=496.76$, $AC=759.33$; whence the angle ADC would be found to be $76^{\circ} 55'$, and $CD=697.64$, as before.

EXAMPLE 4. (Pl. 1, fig. 8.)

Construction.

With the given distances construct the triangle ABC. Make ACE and CAE respectively equal to $13^{\circ} 30'$ and $29^{\circ} 50'$. About the triangle AEC describe the circle ACD. Join EB, and produce it to meet the circumference in D, which will be the situation of the observer.

Since the angles ADE and ACE are subtended by the same arc, we have $ADE=ACE=13^{\circ} 30'$. Also $CDE=CAE=29^{\circ} 50'$.

Calculation.

In the triangle ABC, we have the three sides to find the angle BAC. Thus,

	BC	262			
	AC	404	Ar. Co.	7.393619	
	AB	213	Ar. Co.	7.671620	
		2)879			
Half sum	439.5	-	-	2.642959	
Difference	177.5	-	-	2.249198	
				2)19.957396	
Cos. $\frac{1}{2}$ BAC	17° 48'	-	-	9.978698	
	BAC	35° 36'			

In the triangle ACE we have the angles and side AC, to find AE.

As sin. AEC	136° 40'	-	Ar. Co.	0.163523	
Is to sin. ACE	13° 30'	-	-	9.368185	
So is AC	404	-	-	2.606381	
To AE	137.43	-	-	2.138089	

In the triangle ABE we have the sides AB and AE, and the included angle BAE = BAC + CAE = 65° 26'. To find ABE, thus:

As AB + AE	350.43	-	Ar. Co.	7.455399	
Is to AB - AE	75.57	-	-	1.878349	
So is tang.	$\frac{ABE + ABE}{2}$	57° 17'	-	10.192195	
To tang.	$\frac{ABE - ABE}{2}$	18° 33'	-	9.525943	
	ABE =	38° 44'			

In ABD we have ABD = 180° - 38° 44' = 141° 16', ADB = 13° 30', and BAD = 38° 44' - 13° 30' = 25° 14'. To find AD and DB:

As sin. ADB	13° 30'	-	Ar. Co.	0.631815	
Is to sin. BAD	25° 14'	-	-	9.629721	
So is AB	213	-	-	2.328380	
To BD	389	-	-	2.589916	

And,

As sin. ADB	13° 30'	- - - - -	Ar. Co.	0.631815
Is to sin. ABD	141° 16'	- - - - -		9.796364
So is AB	213	- - - - -		<u>2.328380</u>
To AD	570.9	- - - - -		<u><u>2.756559</u></u>

Finally, in ADC we have the angle $ADC=43^\circ 20'$, $CAD=BAC+BAD=60^\circ 50'$ and the side AC; to find CD. Thus,

As sin. ADC	43° 20'	- - - - -	Ar. Co.	0.163523
Is to sin. CAD	60° 50'	- - - - -		9.941117
So is AC	404	- - - - -		<u>2.606381</u>
To CD	514.1	- - - - -		<u><u>2.711021</u></u>

This might have been solved by finding $ACB=28^\circ 14'$, $CE=292.87$, whence CBE would have been found to be $=77^\circ 26'$, $BD=388.9$, $DC=514$, and $AD=570.8$.

EXAMPLE 5. (Pl. 1, Fig. 9.)

Here $AD = \sqrt{BD^2 - AB^2} = \sqrt{1296} = 36$.

And $AC = AD + DC = 75$ Ans.

Or, Trigonometrically;

As BD	39	- - - - -	Ar. Co.	8.408935
Is to BA	15	- - - - -		1.176091
So is radius		- - - - -		<u>10.000000</u>
To cos. B	67° 23'	- - - - -		<u><u>9.585026</u></u>

And,

As radius		- - - - -	Ar. Co.	0.000000
Is to sin. B	67° 23'	- - - - -		9.965248
So is BD	39	- - - - -		<u>1.591065</u>
To AD	36	- - - - -		<u><u>1.556313</u></u>
AC	<u>75</u>			

EXAMPLE 6. (Pl. 1, fig. 10.)

The angle $ACB = DBC - DAC = 25^\circ$.

Then,

As sin $ACB\ 25^\circ$	- - - - -	Ar. Co.	0.374052
Is to sin. $BAC\ 26^\circ\ 30'$	- - - - -		9.649527
So is $AB\ 75$	- - - - -		1.875061
<hr/>			
To $BC\ 79.18$	- - - - -		1.898640
<hr/>			

To find CD , and BD :

As radius	- - - - -	Ar. Co.	0.000000
Is to sin. $B\ 51^\circ\ 30'$	- - - - -		9.893544
So is CB	- - - - -		1.898640
<hr/>			
To $CD\ 61.97$	- - - - -		1.792184
<hr/>			

And,

As radius	- - - - -	Ar. Co.	0.000000
Is to cos. B	- - - - -		9.794150
So is CB	- - - - -		1.898640
<hr/>			
To $BD\ 49.29$	- - - - -		1.692790
<hr/>			

EXAMPLE 7. (Pl. 1, fig. 11.)

Here $ACB = CAD = 35^\circ$ and $BAC = 55^\circ$

Hence,

As rad.	- - - - -	Ar. Co.	0.000000
Is to tan. $BAC\ 55^\circ$	- - - - -		10.154773
So is $AB\ 143$.	- - - - -		2.155336
<hr/>			
To $BC\ 204.2$	- - - - -		2.310109
<hr/>			

EXAMPLE 8. (Pl. 1, fig. 12.)

Construction.

Make $AB=76$, the distance from the lower column to the statue's base. Erect the perpendiculars AD and BF , making the former=50. With D as a centre and distance 86, cross BF in F , which will be the head of the statue.

As cos. E 5° 7' - - - - -	Ar. Co.	0.001734
Is to rad. - - - - -		10.000000
So is IE 156.42 - - - - -		2.194293
		<hr/>
To ED 157.04 - - - - -		<u>2.196027</u>

Otherwise.

$$GD = \sqrt{FD^2 - FG^2} = \sqrt{1620} = 40.25.$$

$$GI = GD + DI = 54.25.$$

$$FH = \sqrt{FE^2 - EH^2} = \sqrt{6465.9375} = 80.41.$$

$$IE = FH + FG = 156.41.$$

$$DI = \sqrt{IE^2 + ID^2} = \sqrt{24660.0881} = 157.03.$$

SURVEYING.

CHAPTER I.

DIMENSIONS OF A SURVEY.

PROBLEM 8.

EXAMPLE 2.

$$\text{Angle B} = 34^\circ + 35^\circ = 69^\circ.$$

EXAMPLE 3.

Here the first bearing must be reversed, since it is towards the station C. It becomes N. 35° W. Hence $C = 180^\circ - (35^\circ + 87^\circ) = 58^\circ$.

EXAMPLE 4.

$$D = 180^\circ - (87^\circ - 58^\circ) = 151^\circ.$$

PROBLEM 9.

EXAMPLE 2.

1st side S. $40\frac{1}{2}^\circ$ E. N 54 E. <hr style="width: 50%; margin-left: 0;"/> $94\frac{1}{2}$ 180 <hr style="width: 50%; margin-left: 0;"/> N. $85\frac{1}{2}^\circ$ E. <hr style="width: 50%; margin-left: 0;"/>	3d N. $29\frac{1}{4}^\circ$ E. N 54 E. <hr style="width: 50%; margin-left: 0;"/> N. $24\frac{3}{4}^\circ$ W. <hr style="width: 50%; margin-left: 0;"/>
---	---

<p>4th N. $28\frac{3}{4}^\circ$ E. N. 54 E. <u> </u> N. $25\frac{1}{4}$ W. <u> </u></p>	<p>5th N. 57° W. N. 54 E. <u> </u> 111 180 <u> </u> S. 69 W. <u> </u></p>
<p>6th S. 47° W. N. 54 E. <u> </u> S. 7 E. <u> </u></p>	

EXAMPLE 3.

<p>1st S. $45\frac{1}{2}^\circ$ W. S. $20\frac{1}{2}$ W. <u> </u> S. 25 W. <u> </u></p>	<p>2d N. 50° W. S. $20\frac{1}{2}$ W. <u> </u> N. $70\frac{1}{2}$ W. <u> </u></p>
<p>3d N. 0° W. S. $20\frac{1}{2}$ W. <u> </u> N. $20\frac{1}{2}$ W. <u> </u></p>	<p>4th N. 85° E. S. $20\frac{1}{2}$ W. <u> </u> N. $64\frac{1}{2}$ E. <u> </u></p>
<p>5th S. 47° E. S. $20\frac{1}{2}$ W <u> </u> S. $67\frac{1}{2}$ E. <u> </u></p>	<p>7th N. $51\frac{1}{4}^\circ$ W. S. $20\frac{1}{2}$ W. <u> </u> N. $71\frac{3}{4}$ W. <u> </u></p>

PROBLEM 10.

EXAMPLE 1.

As sin. bearing $32^\circ 30'$ - - - - -	Ar. Co. 0.269784
Is to radius - - - - -	10.000000
So is departure 10.96 - - - - -	1.039811
	1.309595
To distance 20.40 - - - - -	1.309595

And,

As radius - - - - -	Ar. Co. 0.000000
Is to cotangent bearing - - - - -	10.195813
So is departure - - - - -	1.039811
	1.235624
To difference of latitude 17.20 - - - - -	1.235624

EXAMPLE 2.

As distance 44 - - - - -	Ar. Co.	8.356547
Is to difference of latitude 34.43 - - - - -		1.536937
So is radius - - - - -		10.000000
		<hr/>
To cosine of bearing $38^{\circ} 31'$ - - - - -		9.893484
		<hr/> <hr/>

And,

As rad. - - - - -	Ar. Co.	0.000000
Is to tang. bearing $38^{\circ} 31'$ - - - - -		9.900864
So is diff. lat. 34.43 - - - - -		1.536937
		<hr/>
To departure 27.40 - - - - -		1.437801
		<hr/> <hr/>

EXAMPLE 3.

As cosine of bearing $32^{\circ} 30'$ - - - - -	Ar. Co.	0.073971
Is to radius - - - - -		10.000000
So is diff. of lat. 17.21 - - - - -		1.235781
		<hr/>
To distance 20.41 - - - - -		1.309752
		<hr/> <hr/>

And,

As radius - - - - -	Ar. Co.	0.000000
Is to tang. bearing $32^{\circ} 30'$ - - - - -		9.804187
So is diff. latitude 17.21 - - - - -		1.235781
		<hr/>
To departure 10.96 - - - - -		1.039968
		<hr/> <hr/>

EXAMPLE 4.

As diff. of lat. 27.92 N. - - - - -	Ar. Co.	8.554085
Is to departure 5.32 E. - - - - -		0.725912
So is radius - - - - -		10.000000
		<hr/>
To tang. bear. $10^{\circ} 47'$ - - - - -		9.279997
		<hr/> <hr/>

And,

As cosine bearing $10^{\circ} 47'$ - - - - -	Ar. Co.	0.007737
Is to radius - - - - -		10.000000
So is diff. of lat. - - - - -		1.445915
		<hr/>
To dist. 28.42 - - - - -		1.453652
		<hr/> <hr/>

EXAMPLE 5.

As distance 35.35	-	-	-	-	-	Ar. Co. 8.451611
Is to departure 15.08	-	-	-	-	-	1.178401
So is radius	-	-	-	-	-	10.000000
						9.630012
						9.630012

And,

As radius	-	-	-	-	-	Ar. Co. 0.000000
Is to cos. bearing 25° 15'	-	-	-	-	-	9.956387
So is distance	-	-	-	-	-	1.548389
						1.504776
						1.504776

PROBLEM 12.

Sta.	Courses.	Dist.	N.	S.	E.	W.	Cor. N.	Cor. E.	N.	S.	E.	W.
1	N. 75 E.	13.70	3.54		13.24		2	2	3.56		13.26	
2	N. 20½ E.	10.30	9.65		3.61		1	1	9.66		3.62	
3	East.	16.20			16.20		2	2	.02		16.22	
4	S. 33½ W.	35.30		29.44		19.49	5	5		29.39		19.44
5	S. 76 W.	16.00		3.87		15.52	2	2		3.85		15.50
6	North.	9.00	9.00				1	1	9.01		.01	
7	S. 84 W.	11.60		1.21		11.54	2	2		1.19		11.52
8	N. 53¼ W.	11.60	6.94			9.29	2	2	6.96			9.27
9	N. 36¾ E.	19.36	15.51		11.59		3	2	15.54		11.61	
10	N. 22½ E.	14.00	12.93		5.36		2	2	12.95		5.38	
11	S. 76¾ E.	12.00		2.75	11.68		2	2		2.73	11.70	
12	S. 15 W.	10.85		10.48		2.81	2	1		10.46		2.80
13	S. 18 W.	10.62		10.10		3.28	2	1		10.08		3.27
			57.57	57.85	61.68	61.93						
				57.57		61.68						

Error South .28

.25 Error West.

CHAPTER II
SUPPLYING OMISSIONS.

PROBLEM I.

EXAMPLE 2.

Sta.	Courses.	Dist.	N.	S.	E.	W.
1	N. $15\frac{3}{4}^{\circ}$ W.	9.40	9.05			2.55
2	N. $63\frac{3}{4}$ E.	10.43	4.61		9.36	
3	S. 49 E.	8.12		5.33	6.13	
4	S. $13\frac{1}{2}$ E.	8.45		8.22	1.98	
5	S. $16\frac{3}{4}$ E.	6.44		6.17	1.86	
6				(6.11)		(10.64)
7	N. 60 W.	9.72	4.86			8.41
8	N. $17\frac{1}{4}$ W.	7.65	7.31		2.27	
			25.83	25.83	21.60	21.60

Then,

As diff. lat. 6.11 S. - - - - - Ar. Co. 9.213959

Is to depart. 10.64 W. - - - - - 1.026942

So is radius - - - - - 10.000000

To tang. bearing S. $60^{\circ} 8'$ W. - - - - - 10.240901

And, As cosine bearing $60^{\circ} 8'$ - - - - - Ar. Co. 0.302785

Is to radius - - - - - 10.000000

So is diff. lat. - - - - - 0.786041

To distance 12.27 - - - - - 1.088826

EXAMPLE 3.

Sta.	Courses.	Dist.	N.	S.	E.	W.
1	S. 52° W.	10.70		6.59		8.43
2	S. $7\frac{1}{2}$ W.	13.92		13.80		1.82
3	S. $34\frac{1}{4}$ E.	9.00		7.44	5.07	
4			(27.83)		(5.18)	
				27.83	10.25	10.25

Then,

As diff. lat. 27.83	- - - - -	Ar. Co.	8.555487
Is to departure 5.18	- - - - -		0.714330
So is radius	- - - - -		<u>0.000000</u>
To tang. bearing N. 10° 33' E.	- - - - -		<u>9.269817</u>

And,

As cosine bearing 10° 33'	- - - - -	Ar. Co.	0.007404
Is to radius	- - - - -		10.000000
So is diff. lat. 27.83	- - - - -		<u>1.444513</u>
To distance 28.31	- - - - -		<u>1.451917</u>

EXAMPLE 4.

Sta.	Bearing.	Dist.	N.	S.	E.	W.
1	S. 10° E.	92.20		90.80	16.01	
2	S. 15 W.	120.50		116.39		31.19
3	S. 18½ W.	205.00		194.40		65.05
4	S. 71½ E.	68.00		21.58	64.49	
5						
				423.17	80.50	96.24
						<u>80.50</u>
						<u>15.74</u>

Then,

As diff. of latitude 423.17	- - - - -	Ar. Co.	7.373485
Is to departure 15.74	- - - - -		1.197005
So is radius	- - - - -		<u>10.000000</u>
To tang. bearing 2° 8'	- - - - -		<u>8.570490</u>

And,

As cosine bearing 2° 8'	- - - - -	Ar. Co.	0.000301
Is to radius	- - - - -		10.000000
So is diff. lat. 423.17	- - - - -		<u>2.626515</u>
To distance 423.46	- - - - -		<u>2.626816</u>

PROBLEM II.

EXAMPLE 2.

Sta.	Bearing.	Changed Bearing.	Dist.	N.	S.	E.	W.
1	S. 40½ E.	N. 85½ E.	31.80	2.49		31.70	
2	N. 54 E.	North.		(2.08)			
3	N. 29¼ E.	N. 24¾ W.	2.21	2.01			.93
4	N. 28¾ E.	N. 25¼ W.	35.35	31.98			15.08
5	N. 57 W.	S. 69 W.			(7.49)		(19.51)
6	S. 47 W.	S. 7 E.	31.30		31.07	3.82	
				38.56	38.56	35.52	35.52

As sine changed bearing 69° - - - - Ar. Co. 0.029848
 Is to radius - - - - - 10.000000
 So is departure 19.51 - - - - - 1.290257
 To distance 5th side 20.90 - - - - - 1.320105

And, As radius - - - - - Ar. Co. 0.000000
 Is to cotang. bearing 69° - - - - - 9.584177
 So is departure 19.51 - - - - - 1.290257
 To diff. latitude 7.49 S. - - - - - 0.874434

PROBLEM III.

EXAMPLE 2.

Sta.	Bearing.	Changed Bearing.	Dist.	N.	S.	E.	W.
1	S. 40½ E.	N. 85½ E.	31.80	2.49		31.70	
2	N. 54 E.	North.		(2.09)			
3	N. 29¼ E.	N. 24¾ W.	2.21	2.01			.93
4	N. E.		35.35	(31.97)			(15.08)
5	N. 57 W.	S. 69 W.	20.90		7.49		19.51
6	S. 47 W.	S. 7 E.	31.30		31.07	3.82	
				38.56	38.56	35.52	35.52

Then,

As distance 4th side	35.35	- - -	Ar. Co.	8.451611
Is to departure	15.08	- - - - -		1.178401
So is radius	- - -	- - - - -		10.000000
To sine chang. bearing	N. 25° 15' W.	- -		9.630012
	54			
Bearing 4th side	N. 28° 45' E.			

And,

As radius	- - - - -	- - - - -	Ar. Co.	0.000000
Is to cos. chang. bearing	25° 15'	- - - - -		9.956387
So is distance	- - - - -	- - - - -		1.548389
To diff. latitude	31.97	- - - - -		1.504776

PROBLEM IV.

EXAMPLE 2. (Pl. 1, fig. 13.)

	Bearing.		Dist.	N.	S.	E.	W.
FA	S.	E.	31.80				
AB	N. 54	E.	2.08	1.23		1.68	
BC	N. 29½	E.	2.21	1.92		1.08	
CD	N. 28½	E.	35.35	31.00		17.00	
DE	N. 57	W.	20.90	11.38			17.52
EF	S.	W.	31.30				
Diff. latitude of EA				45.53		19.76	17.52
						17.52	
						2.24	

Departure of EA 2.24

Then, As diff. lat. EA	45.53	- - - - -	Ar. Co.	8.341702
Is to departure	2.24	- - - - -		0.350248
So is radius	- - - - -	- - - - -		10.000000
To tang. bearing EA	2° 49'	- - - - -		8.691950

And,

As cosine bearing $2^{\circ} 49'$	- - - - -	Ar. Co.	0.000525
Is to radius	- - - - -		10.000000
So is diff. lat.	- - - - -		<u>1.658298</u>
To distance EA 45.59	- - - - -		<u><u>1.658823</u></u>

To find AEF:

AF	31.80		
AE	45.59	Ar. Co.	8.341177
EF	31.30	Ar. Co.	8.504456
	<u>2)108.69</u>		
Half sum	<u>54.34</u>	- - - - -	1.735120
Difference	<u>22.54</u>	- - - - -	1.352954
			<u>2)19.933707</u>
Cos. $\frac{1}{2}$ AEF	<u>$22^{\circ} 6'$</u>	- - - - -	<u>9.966853</u>
	AEF	<u>$44^{\circ} 12'$</u>	
Bearing of EA	-	<u>$2^{\circ} 49'$</u>	
"	EF	<u>S. $47^{\circ} 1' W.$</u>	

To find EAF and bearing of FA:

As AF 31.80	- - - - -	Ar. Co.	8.497573
Is to EF 31.30	- - - - -		1.495544
So is sin. AEF $44^{\circ} 12'$	- - - - -		<u>9.843336</u>
To sin. EAF	- $43^{\circ} 20'$	- - - - -	<u>9.836453</u>
Bearing of EA	<u>$2^{\circ} 49'$</u>		
"	AF	<u><u>$40^{\circ} 31'$</u></u>	

CHAPTER III.

CONTENT OF LAND.

PROBLEM I.

EXAMPLE 4.

Here, Area = $176.4 \times 176.4 = 31116.96$ Sq. Perches,
 = 194 A. 1 R. 36.96 P.

EXAMPLE 5.

Here, Area = $52.25 \times 38.24 = 1998.04$ Sq. Ch.
 = 199 A. 3 R. 8.64 P.

EXAMPLE 6.

Here, Area = $16.54 \times 12.37 = 204.5998$ Sq. Ch.
 = 20 A. 1 R. 33.5968 P.

EXAMPLE 7.

Here, Area = $21.16 \times 11.32 = 239.5312$ Sq. Ch.
 = 23 A. 3 R. 32.4992 P.

PROBLEM 2.

EXAMPLE 2

Here, Area = $\frac{18.37 \times 13.44}{2} = \frac{246.8928}{2} = 123.4464$ Sq. Ch.
 = 12 A. 1 R. 15.1424 P.

EXAMPLE 3.

Here, Area = $\frac{49 \times 34}{2} = \frac{1666}{2} = 833$ Sq. Pe.
 = 5 A. 0 R. 33 Pe.

PROBLEM 3.

EXAMPLE 2. (Pl. 1, fig. 1.)

As radius	- - - - -	Ar. Co.	0.000000
Is to sin. A $47^\circ 30'$	- - - - -		9.867631
So is AB \times AC	{ AB 15.36	- - - - -	1.186391
	{ AC 11.46	- - - - -	1.059185
			<hr/>
To double area	129.78	- - - - -	2.113207
			<hr/>
ABC	- 64.89 Ch.	= 6 A. 1 R. 38. 24 P	

EXAMPLE 3. (Pl. 1, fig. 14.)

Here, As radius	- - - - -	Ar. Co.	0.000000
Is to sin. A	66° 30'	- - - - -	9.962398
So is AB × AC	{ AB 13.84	- - - - -	1.141136
	{ AC 18.23	- - - - -	1.260787
To 2 ABC	231.38	- - - - -	<u>2.364321</u>
ABC	- 115.69 Ch.	= 11 A. 2 R.	11.04 P.

EXAMPLE 4. (Pl. 1, fig. 15.)

Here, As radius	- - - - -	Ar. Co.	0.000000
Is to sin. A	121° 45'	- - - - -	9.929599
So is AB, AC	{ AB 19.74	- - - - -	1.295347
	{ AC 17.34	- - - - -	1.239049
To 2 ABC	291.07	- - - - -	<u>2.463995</u>
ABC	- 145.535 Ch.	= 14 A. 2 R.	8.56 P.

PROBLEM 4.

EXAMPLE 2. (Pl. 1, fig. 1.)

Here, Angle C = 180—(A+B) = 43°. Hence,

As rad., sin. C	{ radius - - -	Ar. Co.	0.000000
	{ sin. C 43° -	Ar. Co.	0.166217
Is to sin. A, sin. B	{ sin. A 63° -	- - - - -	9.949881
	{ sin. B 74° -	- - - - -	9.982842
So is AB ²	{ AB 24.32	- - - - -	1.385964
	{ AB - - -	- - - - -	1.385964
To 2 ABC	742.8	- - - - -	<u>2.870868</u>
ABC	- 371.4 Ch.	= 37 A. 0 R.	22.4 P.

EXAMPLE 3.

Here, the angle C = 94° 15'. Hence

As rad., sin. C	{ rad. - - -	Ar. Co.	0.000000
	{ sin. C 94° 15'	Ar. Co.	0.001196
Is to sin. A, sin. B	{ sin. A 37° 30'	- - - - -	9.784447
	{ sin. B 48° 15'	- - - - -	9.872772
So is AB ²	{ AB 17.36	- - - - -	1.239550
	{ AB - - -	- - - - -	1.239550
To 2 ABC	137.25	- - - - -	<u>2.137515</u>
ABC	- 68.625 Ch.	= 6 A. 3 R.	18 P.

PROBLEM 5.

EXAMPLE 2.

Here, $10.64 + 12.28 + 9.00 = 31.92 =$ sum of sides.

Half sum	15.96 - - - - -	log.	1.203033
Remainders	{	5.32 - - - - -	0.725912
		3.68 - - - - -	0.565848
		6.96 - - - - -	0.842609
			2)3.337402
Area	10)46.63 Ch. - - - - -		1.668701

$4.663 = 4 \text{ A. } 2 \text{ R. } 26.08 \text{ P.}$

EXAMPLE 3.

Here, $20 + 30 + 40 = 90 =$ sum of sides.

Half sum	45 - - - - -		1.653213
Remainders	{	25 - - - - -	1.397940
		15 - - - - -	1.176091
		5 - - - - -	0.698970
			2)4.926214
	10)290.47 - - - - -		2.463107

$29.047 \text{ A.} = 29 \text{ A. } 0 \text{ R. } 7.52 \text{ P.}$

PROBLEM 6.

EXAMPLE 2.

Here, $16.10 \times \frac{6.80 + 3.40}{2} = 16.1 \times 5.1 = 82.11 \text{ Ch.}$
 $= 8 \text{ A. } 0 \text{ R. } 33.76 \text{ P.}$

EXAMPLE 3.

Here, $24 \times \frac{8.27 + 12.43}{2} = 24 \times 10.35 = 248.4 \text{ Ch.}$
 $= 24 \text{ A. } 3 \text{ R. } 14.4 \text{ P.}$

PROBLEM 7.

EXAMPLE 2.

$$\begin{aligned}\text{Here, Area} &= \frac{12.41 + 8.22}{2} \times 5.15 = 53.12225 \text{ Ch.} \\ &= 5 \text{ A. } 1 \text{ R. } 9.956 \text{ P.}\end{aligned}$$

EXAMPLE 3.

$$\begin{aligned}\text{Here, Area} &= \frac{11.34 + 18.46}{2} \times 13.25 = 197.425 \text{ Ch.} \\ &= 19 \text{ A. } 2 \text{ R. } 38.8 \text{ P}\end{aligned}$$

PROBLEM 9.

EXAMPLE 2.

Sta.	Bearing.	Dist.	N.	S.	E.	W.	Cor. S.	Cor. W.	N.	S.	E.	W.	D. M. D.	N. Areas.	S. Areas.
1	N. 28° 45' W.	6.46	5.91			2.60	0	0	5.91			2.60	2.60	15.8660	
2	N. 65° 16' E.	4.40	1.84		4.00		0	0	1.84		4.00		4.00	7.3600	
3	S. 41° 49' E.	9.68		7.21	6.45		1	1		7.22	6.44		14.44		104.2568
4	S. 66° 22' W.	4.895		1.96		4.48	0	0		1.96		4.48	16.40		32.1440
5	N. 24° 2' W.	2.625	2.40			1.07	0	0	2.40			1.07	10.85	26.0400	
6	S. 66° 59' W.	2.49		.97		2.29	0	0		.97		2.29	7.49		7.2658
		80.550	10.15	10.14	10.45	10.44	1	1	10.15	10.15	10.44	10.44		48.7660	148.6661
			10.14		10.44										48.7660

2)94.9001

47.4500

4.745

4

2.980

40

39.200

.01 Error W.

Error S. .01

Area, 4 A. 2 R. 39.2 P.

EXAMPLE 3.

Sta.	Bearing.	Dist.	N.	S.	E.	W.	Cor. N.	Cor. W.	N.	S.	E.	W.	D. M. D.	N. Areas.	S. Areas.
1	S. 62° W.	7.57		3.55		6.68	1	1		3.54		6.69	24.61		87.1194
2	N. 43½° W.	5.89	4.28		4.05		1	1	4.29			4.06	13.86	59.4594	
3	North.	5.82	5.82				1	1	5.83			.01	9.79	57.0757	
4	N. 33½° W.	8.83	7.36		4.88		1	1	7.37			4.89	4.89	36.0393	
5	N. 48 E.	4.81	3.22			3.57	0	1	3.22		3.56		8.56	11.4632	
6	N. 12 E.	4.66	4.56		.97		0	0	4.56		.97		8.09	36.8904	
7	N. 62½° E.	5.27	2.43		4.68		0	1	2.43		4.67		13.73	33.3639	
8	S. 6½° E.	5.60		5.57	.64		1	1		5.56	.63		19.03		105.8068
9	S. 40½° E.	5.87		4.46	3.82		1	1		4.45	3.81		23.47		104.4415
10	East.	6.54			6.54		1	1	.01		6.53		33.81	.3381	
11	North.	5.52	5.52				1	1	5.53			.01	40.33	223.0249	
12	N. 68¼° E.	3.10	1.15		2.88		0	0	1.15		2.88		43.20	49.6800	
13	S. 30 E.	7.90		6.84	3.95		1	1		6.83	3.94		50.02		341.6366
14	S. 23 W.	8.80		8.10		3.44	1	1		8.09		3.45	50.51		408.6259
15	S. 31½° E.	6.42		5.48	3.35		1	1		5.47	3.34		50.40		275.6880
16	S. 50 W.	8.40		5.40		6.44	1	1		5.39		6.45	47.29		254.8931
17	N. 44 W.	6.85	4.93		4.76		1	1	4.94			4.77	36.07	178.1858	
			39.27	39.41	30.40	30.25								685.5207	
			39.27	39.27	30.25										

Error S. 13 15 Error E.

Area, 44 A. 2 R. 21.525 P.

1578.2113
685.5207
2)892.6906
446.3453
44.63453
4
2.58812
40
21.52480

EXAMPLE 4.

Sta.	Bearing.	Dist.	N.	S.	E.	W.	D. M. D.	N. Areas.	S. Areas.
1	S. 85½ E.	23.30		1.92	23.22		73.36		140.8512
2	S. 19 E.	31.12		29.42	10.13		106.71		3139.4082
3				(11.24)		(25.71)	91.13		1024.3012
4	N. 64 W.	29.72	13.03			26.71	38.71	504.3913	
5	N. 15½ W.	22.46	21.64			6.00	6.00	129.8400	
6	N. 58 E.	25.94	13.75		22.00		22.00	302.5000	
7	S. 27¾ E.	6.60		5.84	3.07		47.07		274.8888
			48.42	48.42	58.42	58.42		936.7313	4579.4494 936.7313
									2) 8642.7181
									1821.35905
									182.135905 4
									.543620 40
									21.741800

As diff. lat. 11.24 - - - - - Ar. Co. 8.949234
 Is to departure 25.71 - - - - - 1.410102
 So is radius - - - - - 10.000000
 To tang. bearing 66° 23' - - - - - 10.359336

And,

As cosine bearing 66° 23' - - - - - Ar. Co. 0.397272
 Is to radius - - - - - 10.000000
 So is diff. lat. 11.24 - - - - - 1.050766
 To distance 28.06 - - - - - 1.448038

EXAMPLE 5. (Pl. 2, fig. 4.)

Sta.	Bearing.	Dist.	N.	S.	E.	W.	Cor.	Cor.	N.	S.	E.	W.	D. M. D.	N. Areas.	S. Areas.
1	S. 60 $\frac{3}{4}$ W.	10.34		5.06		9.02				5.06		9.02	25.38		128.4228
2	N. 27 $\frac{1}{4}$ W.	17.88	15.89			8.18			15.89			8.18	8.18	129.9802	
3	N. 51 E.	15.85	9.97		12.32				9.97		12.32		12.32	122.8304	
4	N. (8 $\frac{1}{4}$) E.	9.61	(9.51)		(1.38)				9.51		1.38		26.02	247.4502	
5	S. (73°) E.	19.18		(5.61)	(18.34)					5.61	18.34		45.74		256.6014
6	S. 16 $\frac{3}{4}$ E.	22.21		21.27	6.40			1		21.26	6.41		70.49		1498.6174
7	S. 71 $\frac{1}{2}$ W.	16.66		5.29		15.80				5.29		15.80	61.10		323.2198
8	N. 71 $\frac{1}{4}$ W.	5.76	1.85			5.45			1.85			5.45	39.85	73.7225	
			15.22	37.23	38.44	38.45								573.9833	2206.8614 573.9833
															2)1632.8781
															816.43905
															81.643905
															<u>4</u>
															2.575620
															<u>40</u>
															23,02480

Area 81 A. 2 R. 23,0248 P.

As diff. lat. DF 3.91 - - - - - Ar. Co. 9.407823
 Is to depart. 19.73 - - - - - 1.295127
 So is radius - - - - - 0.000000

To tang. bearing N. 78° 47' E. - - - - - 10.702950

As cosine bearing 78° 47' - - - - - Ar. Co. 0.711036

Is to radius - - - - - 10.000000

So is diff. latitude 3.91 - - - - - 0.592177

To distance DF 20.10 - - - - - 1.303213

FE 19.18

ED 9.61 - - - - - Ar. Co. 9.017277

DF 20.10 - - - - - " " 8.696804

2)48.89

Half sum 24.445 - - - - - 1.388190

Diff. 5.265 - - - - - 0.721398

2)19.823669

Cos. $\frac{1}{2}$ FDE 35° 17' - - - - - 9.911834

FDE 70° 34'

Bearing DF N. 78 47 E.

Bearing DE N. 8° 13' E.

As FE 19.18 - - - - - 8.717151

Is to DE 9.61 - - - - - 0.982723

So is sin. FDE 70° 34' - - - - - 9.974525

To sin. DFE - - 28° 12' - - - - - 9.674399

Bearing FD S. 78 47 W.

106 59

180

Bearing EF S. 73 1 E.

EXAMPLE 6. (Fig. 81, *Surveying*.)

Sta.	Bearing.	Changed bearing.	Dist.	N.	S.	E.	W.	D. M. D.	N. Areas.	S. Areas.
AB	N. $51\frac{1}{2}$ W.	North.		(26.47)				30.12	797.2764	
BC	S. $45\frac{1}{2}$ W.	N. $83\frac{1}{4}$ W.	15.16	1.78			15.06	15.06	26.8068	
CD	N. 50 W.	N. $1\frac{1}{4}$ E.	22.10	22.09		.48		.48	10.6032	
DE	North.	N. $51\frac{1}{4}$ E.	18.83	11.79		14.69		15.65	184.5135	
EF	N. 48 E.	S. $80\frac{3}{4}$ E.	22.60		3.64	22.30		52.64		191.6096
FG	N. $25\frac{1}{2}$ W.	N. $25\frac{3}{4}$ E.	20.17	18.16		8.76		83.70	1519.9920	
GH	East.	S. $38\frac{3}{4}$ E.	26.57		20.72	16.63		109.09		2260.3448
HI	S. $30\frac{1}{2}$ E.	S. $20\frac{3}{4}$ W.	22.86		21.37		8.09	117.63		2513.7531
IK	S. 44 W.	N. $84\frac{3}{4}$ W.	15.04	1.37			14.98	94.56	129.5472	
KL	S. 47 E.	S. $4\frac{1}{4}$ W.	28.55		28.47		2.12	77.46		2205.2862
LA	S. $20\frac{1}{2}$ W.	S. $71\frac{1}{4}$ W.			(7.46)		(22.61)	52.73		393.3658
				81.66	81.66	62.86	62.86		2668.7391	
										7564.3595
										2668.7391
										<u>2)4895.6204</u>
										2447.8102
										<u>244.78102</u>
										4
										3.12408
										<u>40</u>
										4.96320

Area 244 A. 3 R. 4.9632 P.

As sine changed bearing LA 71° 45' - - Ar. Co.	0.022414
Is to radius - - - - -	10.000000
So is departure 22.61 - - - - -	<u>1.354301</u>
To distance LA 23.81 - - - - -	<u><u>1.376715</u></u>

And,

As radius - - - - - Ar. Co.	0.000000
Is to cotang. bearing - - - - -	9.518184
So is departure - - - - -	<u>1.354301</u>
To diff. latitude 7.46 - - - - -	<u><u>0.872485</u></u>

EXAMPLE 7. (Fig. 80, Surveying.)

To find the third side.

Sta.	Bearing.	Dist.	N.	S.	E.	W.
EA	S. 52 W.	10.70		6.59		8.43
AB	S. 7½ W.	13.92		13.80		1.82
BC	S. 33¼ E.	9.00		7.53	4.93	
				27.92		10.25
						<u>4.93</u>
						<u><u>5.32</u></u>

As diff. lat. EC 27.92 - - - - - Ar. Co.	8.554085
Is to depart. 5.32 - - - - -	0.725912
So is radius - - - - -	<u>10.000000</u>
To tang. bearing S. 10° 47' W. - - - - -	<u><u>9.279997</u></u>

As cosine bearing 10° 47' - - - - - Ar. Co.	0.007737
Is to radius - - - - -	10.000000
So-is diff. lat. - - - - -	<u>1.445915</u>
To distance 28.42 - - - - -	<u><u>1.453652</u></u>

Sta.	Bearing.	Dist.	N.	S.	E.	W.	Cor. S.	Cor. W.	N.	S.	E.	W.	D. M. D.	N. Areas.	S. Areas.
1	North.	7.81	7.81				2	1	7.79			.01	33.09	257.7711	
2	S. 76½ E.	18.15		4.32	17.63		3	3		4.35	17.60		50.68		220.4580
3	S. 10½ W.	28.42		27.92		5.30	5	5		27.97		5.35	62.93		1760.1521
4	N. 84½ W.	27.12	2.72			26.98	5	4	2.67			27.02	30.56	81.5952	
5	N. 4½ W.	22.00	21.93			1.73	4	4	21.89			1.77	1.77	38.7453	
6	East.	16.58			16.58		3	3		.03	16.55		16.55		.4965
		120.08	32.46	32.24	34.21	34.01							378.1116		1981.1066 378.1116
2)1602.9950															
801.4975 4															
.59900 40															
23.96															

Area, 80 A. 0 R. 23.96 P.

PROBLEM 10.

EXAMPLE 2.

Sta.	Bearing.	Dist.	N.	S.	E.	W.	Cor. S.	Cor. W.	N.	S.	E.	W.	D. M. D.	N. Areas.	S. Areas.
1	N. 36½ W.	30.00	24.04			17.95	1	0	24.03			17.96	17.96	431.5788	
2	N. 56½ E.	21.60	12.00		17.96		1	0	11.99		17.96		17.96	215.3404	
3	N. 26½ E.	13.44	12.03		6.00		0	0	12.03		6.00		41.92	504.2976	
4	S. 71½ E.	18.96		6.02	17.98		0	0		6.02	17.98		65.90		396.7180
5	S. 26½ E.	13.46		12.04	6.01		0	0		12.04	6.01		89.89		1082.2756
6	S. 45 W.	42.41		29.98		29.98	1	1		29.99		29.99	65.91		1976.6409
		139.87	48.07	48.04	47.95	47.93	3	2						1151.2168	3455.6345
		48.04			47.93										1151.2168

Error S. .03
.02 Error W.

128 A. 2 R. 27.19 P.

1st Stat. Line.

No.	Dist.	Off-sets.	Int. Dist.	Summs.	Areas.
1	0.00	0.50			
2	6.10	3.40	6.10	3.90	23.7900
3	10.15	3.10	4.05	6.50	26.3250
4	14.08	3.96	3.93	7.06	27.7458
5	19.20	2.70	5.12	6.66	34.0992
6	21.60	0.55	2.40	3.25	7.8000
					2119.7600
					59.8800

3d Stat. Line.

No.	Dist.	Off-sets.	Int. Dist.	Summs.	Areas.
1	0.00	0.55			
2	4.20	2.50	4.20	3.05	12.8100
3	8.05	3.20	3.85	5.70	21.9450
4	15.15	2.45	7.10	5.65	40.1150
5	18.96	0.50	3.81	2.95	11.2395
					286.1095
					43.0547

4th Stat. Line.

No.	Dist.	Off-sets.	Int. Dist.	Summs.	Areas.
1	0.00	0.50			
2	5.12	2.75	5.12	3.25	16.6400
3	10.00	1.90	4.88	4.65	22.6920
4	13.46	0.70	3.46	2.60	8.9960
					248.3280
					24.1640

2d Stat. Line.

No.	Dist.	Off-sets.	Areas.
1	0.00	0.55	
2	13.44	0.55	7.3920
			7.3920

1st Stat. Line,	59.8800
2d "	7.3920
3d "	43.0547
4th "	24.1640
Area off-sets,	134.4907

PROBLEM 10. (EXAMPLE 3.)

Adding 1' to each of the angles, we find the bearings as follows :

Sta.	Bearing.	Dist.	N.	S.	E.	W.	Cor. S.	N.	S.	E.	W.	N. Areas.	S. Areas.
D	N.	8.35	8.35				2	8.33					
C	N. 67° 34' E.	2.41	.92		2.23		0	.92		2.23		2.0516	
B	S. 21° 8' E.	9.42		8.79	3.40		2		8.81	3.40			69.2466
A	S. 85° 39' W.	5.65		.43		5.63	1		.44		5.63		2.4772
			9.27	9.22	5.63	5.63	5	9.25	9.25	5.63	5.63	2.0516	71.7238
			.22										2.0516
			.05 Error S.										
			2)69.6722										
			34.8361										
			4.4667										
			39.3028										
			3.93028										
			4										
			3.72112										
			40										
			28.8448										

Area, 3 A. 3 R. 28.8448 P.

On AB.

Dist.	Off-sets.	Int. Dist.	Sums.	Areas.
0.00	0.00			
1.00	.35	1.00	.35	.3500
1.59	.26	.59	.61	.3599
2.25	.50	.66	.76	.5016
4.17	.46	1.92	.96	1.8432
4.58	.54	.41	1.00	.4100
7.32	.16	2.74	.70	1.9180
7.66	.06	.34	.22	.0748
8.25	.11	.59	.17	.1003
8.75	.00	.50	.11	.0550
9.00	.21	.25	.21	.0525
9.42	.00	.42	.21	.0882
			2)5.7535	
			2.8767	

On CD.

Dist.	Off-sets.	Int. Dist.	Sums.	Areas.
0.00	0.00			
.34	.41	.34	.41	.1394
1.00	.00	.66	.41	.2706
2.15	.68	1.15	.68	.7820
3.75	.00	1.60	.68	1.0880
4.40	.00	.65	.00	.0000
6.50	.25	2.10	.25	.5250
8.00	.00	1.50	.25	.3750
			2)3.1800	
			1.5900	
			2.8767	
			4.4667	

PROBLEM 13.

EXAMPLE 2. (Pl. 2, fig. 5.)

Here the various angles will be found to be as in the following proportions. Then,

To find log. of GA:

As sin. FAG 88° 30'	- - - - -	Ar. Co.	0.000149
Is to sin. GFA 68° 30'	- - - - -		9.968678
So is FG 20 ch.	- - - - -		<u>1.301030</u>
To GA	- - - - -		<u><u>1.269857</u></u>

To find log. GB:

As sin. FBG 42°	- - - - -	Ar. Co.	0.174489
Is to sin. GFB 24°	- - - - -		9.609313
So is FG	- - - - -		<u>1.301030</u>
To GB	- - - - -		<u><u>1.084832</u></u>

To find log. GC:

As sin. GCF 43° 15'	- - - - -	Ar. Co.	0.164193
Is to sin. GFC 38°	- - - - -		9.789342
So is FG	- - - - -		<u>1.301030</u>
To GC	- - - - -		<u><u>1.254565</u></u>

To find log. GD:

As sin. GDF 44° 30'	- - - - -	Ar. Co.	0.154338
Is to sin. GFD 59°	- - - - -		9.933066
So is GF	- - - - -		<u>1.301030</u>
To GD	- - - - -		<u><u>1.388434</u></u>

To find log. GE:

As sin. GEF 35° 30'	- - - - -	Ar. Co.	0.236046
Is to sin. GFE 103° 30'	- - - - -		9.987832
So is GF	- - - - -		<u>1.301030</u>
To GE	- - - - -		<u><u>1.524908</u></u>

To find 2 ABG:

As radius	- - - - -	Ar. Co.	0.000000
Is to sin. AGB	91° - - - - -		9.999934
So is BG, AG	{	BG	1.084832
		AG	1.269857
To 2 ABG	226.268		<u>2.354623</u>

To find 2 BGC:

As radius	- - - - -	Ar. Co.	0.000000
Is to sin. BGC	15° 15' - - - - -		9.420007
So is GB, GC	{	GB	1.084832
		GC	1.254565
To 2 BGC	57.465		<u>1.759404</u>

To find 2 CGD:

As radius	- - - - -	Ar. Co.	0.000000
Is to sin. CGD	22° 15' - - - - -		9.578236
So is GC, GD	{	GC	1.254565
		GD	1.388434
To 2 CGD	166.431		<u>2.221235</u>

To find 2 DGE:

As radius	- - - - -	Ar. Co.	0.000000
Is to sin. DGE	35° 30' - - - - -		9.763954
So is GD, GE	{	GD	1.388434
		GE	1.524908
To 2 DGE	475.657		<u>2.677296</u>

To find 2 EGA:

As radius	- - - - -	Ar. Co.	0.000000
Is to sin. EGA	18° - - - - -		9.489982
So is EG, GA	{	GE	1.524908
		GA	1.269857
To 2 EGA	192.640		<u>2.284747</u>

2 DGE	475.657
2 CGD	166.431
2 BGC	57.465

892.193

2 AGB	226.268
-------	---------

2)665.925

ABCDE 332.9625 Ch. = 33 A. 1 R. 7.4 P.

CHAPTER IV.
LAYING OUT AND DIVIDING LAND.

PROBLEM 1.

EXAMPLE 2.

Here, 325 Acres = 3250 chains.

And side = $\sqrt{3250} = 57$ chains.

PROBLEM 2.

EXAMPLE 2.

Here breadth = $\frac{5 \text{ Acres}}{8 \text{ chains}} = \frac{50}{8} = 6.25$ chains.

PROBLEM 3.

EXAMPLE 2.

Here, 27 A. 3 R. 20 P. = 4460 P.

And, As 7 : 9 :: 4460 : 5734.2857.

$\sqrt{5734.2857} = 75.725 =$ length.

Also, As 9 : 7 :: 75.725 : 58.897 = breadth.

PROBLEM 4.

EXAMPLE 2. (Pl. 2, fig. 6.)

Here, 114 A. 2 R. 33.4 P. = 1147.0875 chains.

Also, $\sqrt{1147.0875 + 7.55^2} = \sqrt{1204.09} = 34.7$.

And, $34.7 + 7.55 = 42.25$ length.

$34.7 - 7.55 = 27.15$ breadth.

PROBLEM 5.

EXAMPLE 3. (Pl. 2, fig. 7.)

Here, 2 Acres = 320 Perches.

And,

As AB, sin. A	{ AB 30 P. -	Ar. Co.	8.522879
	{ sin. A 71° 15'	Ar. Co.	0.023682
Is to 2 ABC 640	- - - - -		2.806180
So is radius - -	- - - - -		10.000000
To AC 22.53	- - - - -		<u>1.352741</u>

EXAMPLE 4. (Pl. 2, fig. 8.)

As AB, sin. A	{ AB 32.26 -	Ar. Co.	8.491336
	{ sin. A 83° 30'	Ar. Co.	0.002801
Is to ABCD 740	- - - - -		2.869232
So is radius - -	- - - - -		10.000000
To AD 23.09	- - - - -		<u>1.363369</u>

PROBLEM 6.

EXAMPLE 2. (Pl. 2, fig. 9.)

Here, 27 A. 1R. 16 P. = 273.5 Ch.

And,

As ABC 273.5	- - - - -	Ar. Co.	7.563043
Is to BDC 100	- - - - -		2.000000
So is AB 35.20	- - - - -		1.546543
To BD 12.87	- - - - -		<u>1.109586</u>

PROBLEM 7.

EXAMPLE 2. (Pl. 2, fig. 10.)

Construction.

Make AB, equal to the greater of the given sides (20). Draw BD perpendicular to AB, equal to twice the given area, divided by AB (12.39). Through D draw DC parallel to AB. Then if AC be made equal to the other given side (16.25), and BC be joined; ABC will be the triangle.

For the Division Line. Make AP = 8.50 the given distance. Take AF to AC in the ratio of the part to be cut off to the whole area. Join PF, draw BG parallel to it; then PG will be the division line.

Demonstration.

AB : AP :: AG : AF, Therefore, AB.AC : AP.AG :: AC.AG : AG.AF :: AC : AF, or AB.AC.sin. A : AP.AG.sin. A :: AC : AF :: m : n (m being the whole area, and n the part to be cut off.) Hence, since AC.AB sin. A = m, AP.AG sin. A = n, and PG is the division line.

Calculation.

As ABC	123.9375	- - - - -	Ar. Co.	7.906798
Is to APG	30	- - - - -		1.477121
So is AB.AC	{ AB 20 { AC 16.25	- - - - -		1.301030
				1.210853
To AP.AG	- - - - -			1.895802
AP = 8.50	- - - - -			0.929419
AG = 9.255	- - - - -			<u>0.966383</u>

PROBLEM 8.

EXAMPLE 2. (Pl. 2, fig. 11.)

Here, As BAC	100 ch.	- - - - -	Ar. Co.	8.000000
Is to BDG	45	- - - - -		1.653213
So is BA ²	{ BA 25 { BA	- - - - -		1.397940
				1.397940
To BD ²	- - - - -			2)2.449093
BD = 16.77	- - - - -			<u>1.224546</u>

PROBLEM 9.

EXAMPLE 2. (Pl. 2, fig. 12.)

Here the angles are, A = 71° 45', B = 49° 15', and C = 59°. Hence,

As sin. A . sin. B	{ sin. A 71° 45' { sin. B 49° 15'	- - - - -	Ar. Co.	0.022414
			" "	0.120580
Is to rad. . sin. C	{ radius { sin. C 59°	- - - - -		10.000000
				9.933066
So is 2 ABC	80 ch.	- - - - -		1.903090
To AB ²	- - - - -			2)1.979150
AB = 9.763	- - - - -			<u>.989575</u>

PROBLEM 10.

EXAMPLE 2. (Pl. 2, fig. 13.)

Here the angles $A = 99^\circ 30'$, $B = 122^\circ$, and $P = 41^\circ 30'$.

And, As	sin. A . sin. B	{	sin. A $99^\circ 30'$	Ar. Co.	0.005997
			sin. B 122°	" "	0.071580
	Is to rad. . sin. P	{	radius - - - - -	- - - - -	10.000000
			sin. P $41^\circ 30'$	- - - - -	9.821265
So is 2 ABCD	50 ch. - - - - -	- - - - -	- - - - -	- - - - -	<u>1.698970</u>
To fourth term	39.61 - - - - -	- - - - -	- - - - -	- - - - -	<u>1.597812</u>
	AB^2 - -		36		
	CD^2 -		$\sqrt{75.61} = 8.695$.		

Also, As	sin. P $41^\circ 30'$	- - - - -	Ar. Co.	0.178735
Is to sin. B	122°	- - - - -	- - - - -	9.928420
So is DC—AB	2.695	- - - - -	- - - - -	<u>0.430559</u>
To AD	3.449	- - - - -	- - - - -	<u>0.537714</u>

EXAMPLE 3. (Pl. 3, fig. 1.)

Here the angles are, $A = 90^\circ$, $B = 73^\circ 30'$, and $P = 16^\circ 30'$.

Also, As	sin. A . sin. B	{	sin. A 90°	Ar. Co.	0.000000
			sin. B $73^\circ 30'$	" "	0.018263
	Is to rad. . sin. P	{	radius - - - - -	- - - - -	10.000000
			sin. P $16^\circ 30'$	- - - - -	9.453342
So is 2 ABCD	160 ch. - - - - -	- - - - -	- - - - -	- - - - -	<u>2.204120</u>
To fourth term	47.39 - - - - -	- - - - -	- - - - -	- - - - -	<u>1.675725</u>
	AB^2 .		182.25		
	$CD = \sqrt{134.86} = 11.61$.				

And, As	sin. P $16^\circ 30'$	- - - - -	Ar. Co.	0.546658
Is to sin. B	$73^\circ 30'$	- - - - -	- - - - -	9.981737
So is AB—CD	1.89	- - - - -	- - - - -	<u>0.276462</u>
To AD	6.38	- - - - -	- - - - -	<u>0.804857</u>

PROBLEM 12.

EXAMPLE 2. (Pl. 3, fig. 6.)

Here, As 2 : 1 :: BC²(100) : EF² = 50,

$$EF = \sqrt{50} = 7.07.$$

And, As BC (10) : EF (7.07) :: AB (15) : AF = 10.605.

PROBLEM 13.

EXAMPLE 2. (Pl. 3, fig. 7.)

Here the angles are, A = 36° 30', B = 100° 30', C = 43°, E = 74° 30', and F = 69°.

As sin. E. sin. F	{ sin. E 74° 30 sin. F 69 - - " "	Ar. Co.	0.016089 0.029848
Is to sin. C. sin. B	{ sin. C 43° - - - - sin. B 100° 30' - - -		9.833783 9.992666
So is BC ²	{ BC 18.66 - - - - BC - - - - -		1.270912 1.270912
To fourth term	259.54 - - - -		2.414210
	4		
	9)1038.16		

$$EF = \sqrt{115.35} = 10.74.$$

As sin. A 36° 30'	- - - - -	Ar. Co.	0.225612
Is to sin. E 74° 30'	- - - - -		9.983911
So is EF 10.74	- - - - -		1.031004
To AF 17.40	- - - - -		1.240527

PROBLEM 14.

EXAMPLE 2. (Pl. 3, fig. 8.)

$$\text{Here, } EF = \sqrt{\left(\frac{AB^2 + CD^2}{2}\right)} = \sqrt{5796.18} = 76.13.$$

And, DC—AB (29.4) : FE—AB (16.13) :: AD (30) : AF = 16.46

PROBLEM 16.

EXAMPLE 1. (Pl. 3, fig. 12.)

The area of this tract may be found to be 858.552 square chains. (The latitudes and departures are mostly given in the subsequent operations.)

To find area ABCDE, and the latitude and departure of EA.

	N.	S.	E.	W.	D. M. D.	N. Areas.	S. Areas.
AB		9.15		6.46	40.86		373.8690
BC	17.21			17.20	17.20	296.0120	
CD	10.41		2.89		2.89	30.0849	
DE		3.61	15.60		21.88		77.1818
EA		(14.86)	(5.17)		42.15		626.3490
	27.62	27.62	23.66	23.66		326.0969	1077.3998 326.0969
							751.3029 858.552
						2 ABCDEI	2)107.2491
						AEI	<u>53.6245</u>

	N.	S.	E.	W.	D. M. D.	N. Areas.	S. Areas.
AE	14.86			5.17	5.17	76.8262	
EF	.93		21.49		21.49	19.9857	
FA		(15.79)		(16.32)	26.66		420.9614
						96.8119	96.8119
							2)324.1495
						AEF	<u>162.07475</u>

As AEF 162.07475 - - - - - Ar. Co. 7.790285
 Is to AEI 53.6245 - - - - - - - - - 1.729363
 So is lat. EF .93 - - - - - - - - - -1.968483
 To lat. EI .31 - - - - - - - - - -1.488131

As AEF - - - - - Ar. Co. 7.790285
 Is to AEI - - - - - 1.729363
 So is depart. EF 21.49 - - - - - 1.332236
 To depart. EI 7.11 - - - - - 0.851884

	N.	S.	E.	W.
AE	14.86			5.17
EI	.31		7.11	
IA		(15.17)		(1.94)

As diff. lat. 15.17 - - - - - Ar. Co. 8.819014
 Is to depart. 1.94 - - - - - 0.287802
 So is radius - - - - - 10.000000
 To tang. bearing AI 7° 17' - - - - - 9.106816

As cos. bearing - - - - - Ar. Co. 0.003518
 Is to radius - - - - - 10.000000
 So is diff. lat. 15.17 - - - - - 1.180986
 To dist. AI 15.29 - - - - - 1.184504

CHAPTER V.

MISCELLANEOUS QUESTIONS.

QUESTION 1.

Here $\frac{1}{2}$ Acre = 2420 square yards;

$$\text{And radius} = \sqrt{\left(\frac{2420}{3.1416}\right)} = \sqrt{770.3081} = 27.75.$$

QUESTION 2.

Construction.

Make AB (Pl. 4, fig. 1) = 40 = one of the given sides, and at A draw AL perpendicular to AB and $= \frac{320}{40} = 8$; through L draw GH parallel to AB, and with the centre A and distance = 20 = the other given side, describe an arc, cutting GH in D and C; join AC, BC, AD, and BD: then will ABC and ABD answer the conditions of the question.

Calculation.

$AE = AF = \sqrt{AC^2 - CE^2} = \sqrt{400 - 64} = 18.3303$; and $BE = AB - AE = 21.6697$; therefore, $BC = \sqrt{BE^2 + EC^2} = \sqrt{533.57589809} = 23.099$. Also, $BF = AB + AF = 58.3303$, and $BD = \sqrt{BF^2 + FD^2} = \sqrt{3466.42389809} = 58.876$.

Another Solution.

Find $AE = AF$ as before. Then, from Geometry, $BC^2 = AB^2 + AC^2 - 2 AB.AE = 2000 - 1466.424 = 533.576$, and $BC = 23.099$. Also, $BD^2 = AB^2 + AD^2 + 2 AB.AF = 2000 + 1466.424 = 3466.424$, and $BF = 58.876$.

QUESTION 3.

Here it is evident the number of acres will be inversely as the number of square yards in a Perch:

Therefore, $6^2 : 5.5^2 :: 110 \text{ A.} : 92 \text{ A. } 1 \text{ R. } 28\frac{3}{5} \text{ P. Cheshire.}$

And $7^2 : 5.5^2 :: 110 \text{ A.} : 67 \text{ A. } 3 \text{ R. } 25\frac{1}{4} \text{ P. Irish.}$

QUESTION 4.

Here $\frac{28}{12} = \frac{7}{3}$ = twice the thickness of the wall, also 840 links = 554.4 feet = the longer diameter within the walls; 612 links = 403.92 feet = the shorter; $554.4 + \frac{7}{3} = \frac{1670.2}{3}$ = longer diameter outside, and $403.92 + \frac{7}{3} = \frac{1218.76}{3}$ = shorter. By Prob. 10, Chap. III. the area within the walls = $554.4 \times 403.92 \times .7854 = 223933.248 \times .7854 = 175877.1729792 \text{ ft.} = 4 \text{ A. } 0 \text{ R. } 6 \text{ P.}$ The area to the outside = $\frac{1670.2}{3} \times \frac{1218.76}{3} \times .7854 = \frac{2035572.952}{9} \times .7854 = \frac{1598738.9965008}{9} = 177637.6662778 \text{ feet.}$ Therefore $177637.666 - 175877.173 = 1760.493 = \text{area the wall stands upon.}$

QUESTION 5.

Here the area of an ellipse whose diameters are 3 and 2 is 4.7124. Then, since similar figures are as the squares of their like dimensions, we have, As $4.7124 : 160 :: 9 : 305.5768 = \text{square of the longer diameter;}$ consequently $\sqrt{305.5768} = 17.481 = \text{longer diameter;}$ and $3 : 2 :: 17.481 : 11.654 = \text{shorter diameter.}$

QUESTION 6.

Find the area of the triangle whose sides are 9, 8, and 6; thus, $\frac{9+8+6}{2} = 11.5$, and $\sqrt{11.5 \times 2.5 \times 3.5 \times 5.5} = \sqrt{553.4375} = 23.525$ square perches. Also, $6 \text{ A. } 1 \text{ R. } 12 \text{ P.} = 1012 \text{ P.}$, and $23.525 : 1012 :: 8^2 : 2753.1562 = \text{square of the second side;}$ therefore $\sqrt{2753.1562} = 52.47$. Also,
 $8 : 9 :: 52.47 : 59.029 = \text{longest side.}$
 $8 : 6 :: 52.47 : 39.353 = \text{shortest side.}$

QUESTION 7. (Pl. 4, fig. 2.)

To find ABC:

AB	27.35		
BC	31.15		
CA	38.00		
	<u>2)96.50</u>		
Half sum	48.25	- - - - -	1.683497
Remainders	{ 20.90	- - - - -	1.320146
	{ 17.10	- - - - -	1.232996
	{ 10.25	- - - - -	1.010724
			<u>2)5.247363</u>
ABC	420.417	- - - - -	<u><u>2.623681</u></u>

To find ACE:

AC	38.		
CE	40.10		
EA	22.20		
	<u>2)100.30</u>		
Half sum	50.15	- - - - -	1.700271
Remainders	{ 12.15	- - - - -	1.084576
	{ 10.05	- - - - -	1.002166
	{ 27.95	- - - - -	1.446382
			<u>2)5.233395</u>
ACE	413.71	- - - - -	<u><u>2.616697</u></u>

To find CED:

CE	40.10		
CD	23.70		
DE	29.25		
	<u>2)93.05</u>		
Half sum	46.525	- - - - -	1.667686
Remainders	{ 6.425	- - - - -	0.807873
	{ 22.825	- - - - -	1.358410
	{ 17.275	- - - - -	1.237408
			<u>2)5.071377</u>
CED	343.311	- - - - -	<u><u>2.535688</u></u>

Hence the whole area = $420.418 + 413.71 + 343.308 = 1177.436$
 Ch. = 117 A. 2 R. 38.976 P.

QUESTION 8.

Construction.

Make AB (Pl. 4, fig. 3.) equal to half the given perimeter = 52, and bisect it in D; make DC perpendicular to AB and equal to the square root of the given area; with the centre C and radius equal to AD, describe an arc cutting AB in E, complete the rectangle AEEG and it will be the one required. The demonstration is evident from Geometry.

Calculation.

$$DE = \sqrt{CE^2 - CD^2} = \sqrt{676 - 480} = \sqrt{196} = 14.$$

$$AE = AD + DE = 26 + 14 = 40, \text{ and } EF = EB = 26 - 14 = 12.$$

QUESTION 9.

Construction.

Draw any line AC, (Pl. 4, fig. 4.) and in it take AE = 20 = given difference; make EF perpendicular to AC = 20; join AF and produce it to B, making FB = 20; then will AB be a side of the square.

Demonstration.

Since EA = EF, the angles FAE and AFE are each equal to half a right angle, and AC must be the diagonal of the square. Again the triangles CEF and CBF are equal, since they are right angled at E and B, and have the hypotenuse and one leg in each equal: we have therefore CE = CB = CA - 20.

Calculation.

$AF = \sqrt{AE^2 + EF^2} = \sqrt{800} = 28.284$, and $AB = AF + FB = 48.284$; hence the area = $AB^2 = 2331.344656$ sq. per. = 14 A. 2 R. 11.34 P.

QUESTION 10.

Construction.

Let ABCD (Pl. 4, fig. 5.) be the given rectangle. In BA and BA produced take BH = BC, and AR = $\frac{3}{4}$ AD. On BR describe the semicircle BPR, meeting DA produced in P; bisect AH in O, and with the centre O and radius OP, describe the semicircle EPQ, make AG = AQ, complete the rectangle AF, and the thing is done.

Demonstration.

$AF = AE \times AG = AE \times AQ = AP^2 = AB \times AR = \frac{3}{4} AB \times AD = \frac{3}{4} AC$. Also, $BE = BH - HE = BC - AQ = AD - AG = GD$.

Calculation.

$AO = \frac{1}{2} AH = 10$; $AP^2 = AB \times \frac{3}{4} AD = 6000$; therefore, $OP = \sqrt{AP^2 + OA^2} = \sqrt{6100} = 78.1025$; $BE = BO - OE = 90 - 78.1025 = 11.8975$.

QUESTION 11.

Construction.

Let ABD (Pl. 4, fig. 6.) be the given circle. Draw the diameter AB and radius CD perpendicular to it; take $CF = \frac{1}{3} AC$; upon BF describe a semicircle cutting CD in E: with C as a centre and radius CE, describe the circle EGH, and the thing is done.

Demonstration.

CE is a mean proportional between CF and CB; hence $CF : CB :: CE^2 : CB^2 :: 4 : 5$; and since circles are as the squares of their radii, we have $GEH = \frac{1}{3} ABD$.

Calculation.

$$\begin{aligned} \sqrt{5} : \sqrt{4} :: AC (75) : EC &= \frac{75\sqrt{4}}{\sqrt{5}} \\ &= \frac{150\sqrt{5}}{5} = 30\sqrt{5} = 67.082, \text{ and } DE = DC - EC = 7.918. \end{aligned}$$

QUESTION 12.

Construction.

With the given distances form the triangle ABC, (Pl. 4, fig. 7.) Upon AB describe the equilateral triangle ABD; join CD and on it describe the equilateral triangle CDE, which will be the one required.

Demonstration.

Since BD and BC are by construction two of the given distances; it is only necessary to prove that $BE = AC$, which is evident from the equality of the triangles DAC and DBE.

Calculation.

In the triangle ABC, find the angle BAC, thus,

BC	10								
AC	7.5	-	-	-	-	-	-	-	Ar. Co. 9.124939
AB	12.5	-	-	-	-	-	-	-	Ar. Co. 8.903090
	<u>2)30.</u>								
	15	-	-	-	-	-	-	-	1.176091
	5	-	-	-	-	-	-	-	0.698970
									<u>2)19.903090</u>
Cos. $\frac{1}{2}$ BAC									<u>9.951545</u>
BAC									<u><u>53° 8'</u></u>

Then in the triangle DAC we have DA and AC, and the angle DAC = 113° 8' to find DC, thus,

As DA+AC	20								
Is to DA-AC	5	-	-	-	-	-	-	-	Ar. Co. 8.698970
So is tang.	$\frac{DCA+ADC}{2}$	-							0.698970
									<u>9.819684</u>
To tang.	$\frac{DCA-ADC}{2}$	-							9.217624
									<u><u>9.217624</u></u>
	ACD	-							42° 48'

And,

As sin. ACD	42° 48'								
Is to sin. DAC	113° 8'	-	-	-	-	-	-	-	Ar. Co. 0.167848
So is AD	12.5	-	-	-	-	-	-	-	9.963596
									<u>1.096910</u>
To DC	16.92	-	-	-	-	-	-	-	<u><u>1.228354</u></u>

Then in CDE, we have the sides and angles to find the area thus,

As radius									
Is to sin. CDE	60°	-	-	-	-	-	-	-	Ar. Co. 0.000000
So is CD × DE		-							9.937531
									<u>1.228354</u>
									<u>1.228354</u>
To 2 CDE	247.88	-	-	-	-	-	-	-	<u><u>2.394239</u></u>

123.94 Ch. = 12 A. 1 R. 23.04 P.

QUESTION 13.

Construction.

With the given bearings and distances protract the figure ABCDfg Pl. 4, fig. 8. Join Ag, and with the centres g and A, and distances equal to the 4th and 7th sides, describe arcs cutting in G. Join AG and gG, and draw DE, EF, and FG respectively parallel and equal to gG, Df, and fg. Then will ABCDEFG be the required map.

Calculation.

To find the bearing and distance of gA.

	Bearing.	Dist.	N.	S.	E.	W.
AB	S. 72 W.	24.00		7.42		22.83
BC	North.	38.00	38.00			
CD	N. 82½ E.	41.00	5.35		40.65	
Df	S. 80 E.	11.50		2.00	11.32	
fg	S. 26 W.	22.00		19.77		9.64
gA				(14.16)		(19.50)
			43.35	43.35	51.97	51.97

As diff. lat. 14.16 - - - - - Ar. Co. 8.848937
 Is to departure 19.50 - - - - - " 1.290035
 So is radius - - - - - " 10.000000

To tang. bearing gA S. 54° 1' W. - - - - - 10.138972

As cos. bearing 54° 1' - - - - - Ar. Co. 0.230955
 Is to radius - - - - - " 10.000000
 So is diff. lat. 14.16 - - - - - 1.151063

To distance gA 24.10 - - - - - 1.382018

In the triangle AGg we have the sides to find the angles AgG and GAg;

Thus,

	AG	37			
	gG	20	Ar. Co.	8.698970	
	Ag'	24.1	Ar. Co.	8.617982	
		2)81.1			
	Half sum	40.55	- - - - -	1.607991	
	Remainder	3.55	- - - - -	0.550228	
				2)19.475171	
	Cos. $\frac{1}{2}$ AgG	56° 52 $\frac{1}{2}$ '	- - - - -	9.737585	
	AgG	113° 45'			

And,

As AG	37	- - - - -	Ar. Co.	8.431798
Is to gG	20	- - - - -		1.301030
So is sin. AgG	113° 45'	- - - - -		9.961569
To sin. gAG	29° 39'	- - - - -		9.694397

Applying now the bearing of gA to these angles we will have the bearing of gG or DE = S. 59° 44' E, and of GA = S. 83° 40' W
 The area will then be calculated as in the following table, viz.

Sta.	Bearing.	Dist.	N.	S.	E.	W.	Cor. S.	Cor. W.	N.	S.	E.	W.	D. M. D.	N. Areas.	S. Areas.
AB	S. 72° W.	24.00		7.42		22.88	1			7.43		22.88	22.88		169,6267
BC	North.	38.00	38.00				1		37.99				00.00		
CD	N. 82½° E.	41.00	5.35		40.65		1		5.34		40.65		40.65	217.0710	
DE	S. 59½° E.	20.00		10.06	17.28					10.08	17.28		98.58		998,6864
EF	S. 80° E.	11.50		2.00	11.32					2.00	11.32		127.18		254,3600
FG	S. 26° W.	22.00		19.77		9.64	1			19.78		9.64	128.86		2548,8508
GA	S. 83½° W.	37.00		4.03		36.78	1			4.04		36.78	82.44		383,0576
			43.35	43.30	69.25	69.25									4299,5815
															217,0710
															2)4082,5105
															40)2041,2553
															4)511,25 P.
															12.3 R.

Area, 12 A. 3 R. 1.25 P.

QUESTION 14.

Construction.

Make AB, (Pl. 4, fig. 9.) = the given side, and divide it in D, so that AD may be to DB in the ratio of 3 to 2; in AB produced, take DO a fourth proportional to AD—DB, DB, and AD, and with the centre O and radius OD, describe the semicircle DCE; make AG perpendicular to AB, and equal to twice the area divided by AB = 6; through G draw GF parallel to AB, cutting the circle in C and F; join AC BC, AF and BF; then will ABC and ABF answer the conditions of the question.

Demonstration.

Since AD—DB : DB :: AD : DO, we have AD : DB :: AO : DO or AO : AD :: DO : DB, therefore, AO : DO :: DO : OB, consequently (Euclid, F. 6.) AC : BC :: AD : DB :: 3 : 2; and AF : BF : AD : DB :: 3 : 2.

Calculation.

As 3+2 : 15 :: 3 : AD = 9, and DB = 6; also, 9—6 : 6 :: 9 : DO = 18, and AO = 9+18 = 27, join OC, and OF, and let fall the perpendiculars CL and FP; then OL = $\sqrt{OC^2 - CL^2} = \sqrt{324 - 36} = \sqrt{288} = 16.9706$, and AL = AO—OL = 10.0294; hence AC = $\sqrt{AL^2 + LC^2} = \sqrt{136.58886436} = 11.6871$; and as 3 : 2 :: 11.6871 : BC = 7.7914. Again AP = AO+OP = 43.9706, and AF = $\sqrt{AP^2 + PF^2} = \sqrt{1969.41366436} = 44.3781$; and as 3 : 2 :: 44.3781 : BF = 29.5854

QUESTION 15.

Construction.

Make AB, (Pl. 4, fig. 10.) = the given side, and BL = the sum of the other sides; Bisect AB in D, and take DH a third proportional to 2 AB and BL; Draw HE perpendicular to BH and equal to $\frac{1600}{50} = 32$. Through E draw EF parallel and equal to BL; join EA and produce it to G, making FG = AB; draw AC parallel to FG, and join BC; then ABC is the triangle required.

Demonstration.

By Construction $BL^2 = 2 AB \times DH$; also, in the similar triangles EGF and EAC, we have GF (AB) : AC :: EF (BL) : EC (HP).

Hence $BL \times AC = GF \times HP$, or $2 BL \times AC = 2 GF \times HP$. Subtracting these equals from the preceding, we have $BL^2 - 2 BL \times AC = 2 AB \times DH - 2 GF \times HP = 2 AB \times DP = (BP + AP) \times (BP - AP) = BP^2 - AP^2 = BC^2 - AC^2$. Hence $BL^2 - 2 BL \times AC + AC^2 = BC^2$, and $BL - AC = BC$, or $BL = BC + AC$.

Calculation.

As $2 AB(100) : BL(85) :: BL(85) : DH = 72.25$, and $AH = DH - AD = 47.25$. Now in the right angled triangle AHE, we have the sides AH and HE, to find HAE and AE; thus,

As AH 47.25	- - - - -	Ar. Co.	8.325598
Is to HE 32	- - - - -		1.505150
So is radius	- - - - -		<u>10.000000</u>
To tang. HAE $34^\circ 6\frac{1}{2}'$	- - - - -		<u><u>9.830748</u></u>

And,

As cos. HAE $34^\circ 6\frac{1}{2}'$	- - - - -	Ar. Co.	0.081981
Is to radius	- - - - -		10.000000
So is AH	- - - - -		<u>1.674402</u>
To AE 57.07	- - - - -		<u><u>1.756383</u></u>

Now in the triangle GEF we have FE, FG, and the angle FEG = HAE, to find FGE; thus,

As FG 50	- - - - -	Ar. Co.	8.301030
Is to FE 85	- - - - -		1.929419
So is sin. GEF $34^\circ 6\frac{1}{2}'$	- - - - -		<u>9.748776</u>
To sin. FGE $72^\circ 25'$	- - - - -		<u><u>9.979225</u></u>

Finally, in ACE we have AE and the angles to find AC; thus,

As sin. ACE $73^\circ 28\frac{1}{2}'$	- - - - -	Ar. Co.	0.018319
Is to sin. AEC $34^\circ 6\frac{1}{2}'$	- - - - -		9.748776
So is AE	- - - - -		<u>1.756383</u>
To AC 33.3793	- - - - -		<u><u>1.523478</u></u>

And $BC = 85 - 33.3793 = 51.6207$.

QUESTION 16.

Construction.

Make AC (Pl. 4, fig. 11.) = 50 = the given diagonal, and on it describe a semicircle ABC; make AE perpendicular to AC and $= \frac{1200}{50} = 24$; draw EB parallel to AC, cutting the semicircle in B; join AB, BC, and draw CD and DA parallel to them; then will ABCD be the rectangle required.

Demonstration.

Since ABC is an angle in a semicircle, it is right, and ABCD is a rectangle. Also its area = AC × BE = 1200 perches = $7\frac{1}{2}$ acres.

Calculation.

$FG = \sqrt{BG^2 - BF^2} = \sqrt{49} = 7$; $AF = AG - GF = 18$, and $AB = \sqrt{AF^2 + FB^2} = \sqrt{900} = 30$, $BC = \sqrt{AC^2 - AB^2} = \sqrt{1600} = 40$.

QUESTION 17.

Construction.

Make AB (Pl. 4, fig. 12.) = the square root of the given area, and draw CE perpendicular to it; draw BC, making $\angle ABC = 30^\circ$, make $AE = AC$; bisect AC in D, and draw EF perpendicular to CE and = ED. Complete the parallelogram CEFG, which will be the one required.

Demonstration.

Since the angle B = 30° , and A = 90° , $BC = 2 AC = CE = 4 CD$, and $EF = ED = 3 CD$; therefore $FC = \sqrt{EF^2 + EC^2} = 5 CD$. Also $AB^2 = BC^2 - AC^2 = \frac{3}{4} BC^2 = \frac{3}{4} EC^2 = EC \times ED = EC \times EF = CEFG$.

Calculation.

Since $AB^2 = \frac{3}{4} CE^2$ $CE^2 = \frac{4}{3} AB^2 = \frac{4}{3}$ the given area = 784, and $CE = 28$; hence $EF = \frac{3}{4} EC = 21$.

QUESTION 18.

Construction.

With the given bearings and distances protract the figure ABCD, (Pl. 4, fig. 13.) and from B draw BP according to the given bearing

and distance of the spring. Produce DA and CB to meet in F, and through P draw EH parallel to AD. Bisect AF in G, join EG, and draw BM parallel to it, and MN parallel to FE. Make MT perpendicular to MN, and equal to the square root of the given area. Take MU a third proportional to MN and MT; draw UH parallel to MN, cutting AF in I; draw IK perpendicular to AF and equal to EP, and with the centre K and distance PH describe an arc cutting AD in Q; draw QPR, and the thing is done.

Demonstration.

In the similar triangles FGE and FMB, we have $FB : FM :: FE : FG$; therefore, 15.6, the triangle $EFM = BFG$; but $EFM = \frac{1}{2} FMNE$, and $BFG = \frac{1}{2} BFA$; hence $FMNE = BFA$. Again, because the triangles EPR, IQS, and PHS are similar. and the homologous sides EP (IK), IQ, and PH (KQ) form a right angled triangle, we have from Geometry $EPR + IQS = SPH$. Add FISPE to each, and we have $FQR = EFH$. But $FBA = EFMN$, hence $BAQR = MNIH = MN.MU = MT^2 =$ the given area.

Calculation.

From the bearings of the lines the angles may be found as follow. $AFB = BEP = 23^\circ$, $ABF = 84^\circ 30'$, $BAF = 72^\circ 30'$, $EBP = 145^\circ 30'$, and $EPB = 11^\circ 30'$. Then, in the triangle EBP we have all the angles and side BP, to find EP and EB:

Thus,

As sin. BEP 23° - - - - -	Ar. Co. 0.408122
Is to sin. EBP $145^\circ 30'$ - - - - -	9.753128
So is BP 7.90 - - - - -	0.897627
To EP 11.452 - - - - -	<u>1.058877</u>

And,

As sin. BEP - - - - -	Ar. Co. 0.408122
Is to sin. BPE $11^\circ 30'$ - - - - -	9.299655
So is BP - - - - -	0.897627
To BE 4.031 - - - - -	<u>0.605404</u>

QUESTION 19.

Construction.

With the given bearings and distances, protract the figure ABCD, (Pl. 4, fig. 14;) then, by Prob. 15, Chap. IV. divide ABCD into two equal parts by the line EF, parallel to CD; also, by the same problem, divide ABCD, and EBAF, each into two equal parts by the lines OM and PN, parallel to AD; join MN, produce it to I, and draw OH parallel to IM; join IH, then will EF and IH be the division lines required.

Demonstration.

Because PN is parallel to OM, we have $IN : NM :: IP : PO :: IG : GH$, because NG is parallel to HM; therefore, PG is parallel to OH, and consequently to IM. Now since OH is parallel to IM, we have $IHM = IOM$, to each add AIMD, and $AIHD = AOMD = \frac{1}{2} ABCD$. In the same manner it may be shown that $AIGF = \frac{1}{2} ABEF = \frac{1}{4} ABCD$.

Calculation.

Draw EK and IL, each parallel to AD, and MU parallel to AB. From the given bearings find the angle $A = 78^\circ 30'$, $B = 139^\circ 45'$, $C = 78^\circ 45'$, and $D = 63^\circ$. By Prob. 15, Chap. IV., find EF and AF, thus,

As sin. C . sin. D	{	sin. C $78^\circ 45'$	Ar. Co.	0.008426
		sin. D 63°	- Ar. Co.	0.050119
Is to sin. A . sin. B	{	sin. A $78^\circ 30'$	- - - -	9.991193
		sin. B $139^\circ 45'$	- - - -	9.810316
So is AB^2	{	AB 23	- - - -	1.361728
		AB - - - -	- - - -	1.361728
To fourth term		383.274	- - - -	2.583510
CD ²		2161.3201		<u>2.583510</u>
		<u>2544.5941</u>		
		2)2544.5941		
EF =		<u><u>1272.2970</u></u>		
		=		35.67

And in the triangle ECK,

As sin. E 38° 15' - - - - -	Ar. Co.	0.208243
Is to sin. C 78° 45' - - - - -		9.991574
So is CD—EF 10.82 - - - - -		1.034227
To FD - 17.14 - - - - -		<u>1.234044</u>
AD		<u>49.64</u>
AF		<u>32.50</u>

Then in the triangle ECK, we have the angles and side EK = FD, to find EC, thus,

As sin. C 78° 45' - - - - -	Ar. Co.	0.008426
Is to sin. K 63° - - - - -		9.949881
So is EK 17.14 - - - - -		1.234044
To CE 15.57 - - - - -		<u>1.192351</u>

Consequently BE = BC—CE = 14.93. Now by the same problem find OM, AO, PN and AP, thus,

As sin. A . sin. D	{	sin. A - -	Ar. Co.	0.008807
		sin. D - -	Ar. Co.	0.050119
Is to sin. B . sin. C	{	sin. B - - - - -		9.810316
		sin. C - - - - -		9.991574
So is BC ²	{	BC 30.50 - - - - -		1.484300
		BC - - - - -		1.484300
To fourth term		675.18 - - - - -		<u>2.829416</u>
AD ²		2464.1296		<u>2464.1296</u>
		2)3139.3096		

$$OM = \sqrt{1569.6548} = 39.62$$

And,

As sin. RMD 38° 30' - - - - -	Ar. Co.	0.205850
Is to sin. D - - - - -		9.949881
So is AD—OM 10.02 - - - - -		1.000868
To AO 14.34 - - - - -		<u>1.156599</u>

And,

As sin. A . sin. F	{	sin. A - - -	Ar. Co.	0.008807
		sin. F - - -	Ar. Co.	0.050119
Is to sin. B . sin. E	{	sin. B - - - - -		9.810316
		sin. E - - - - -		9.991574
So is BE ²	{	BE 14.93 - - - -		1.174060
		BE - - - - -		1.174060
To Fourth term		161.78 - - - -		<u>2.208936</u>
		AF ² - - - -	1056.25	
				<u>2)1218.03</u>
		PN - - -		$\sqrt{609.01} = 24.68.$

And,

As sin. RMD 38° 30'	- - - -	Ar. Co.	0.205850
Is to sin. F	- - - - -		9.949881
So is AF—PN 7.82	- - - - -		<u>0.893207</u>
To AP 11.19	- - - - -		<u>1.048938</u>

Hence $OP = AO - AP = 3.15$; wherefore we have

$OM - PN (14.94) : PN (24.68) :: OP (3.15) : IP = 5.20$; and $AI = AP - IP = 5.99$.

In the triangle MUL we have the angle $U = A$, $L = D$, and side $MU = IO = IP + PO = 8.35$, to find ML and UL; thus,

As sin. ULM 63°	- - - - -	Ar. Co.	0.050119
Is to sin. MUL 78° 30'	- - - - -		9.991193
So is MU 8.35	- - - - -		<u>0.921686</u>
To ML 9.18	- - - - -		<u>0.962998</u>

And,


As sin. MLU 63°	- - - - -	Ar. Co.	0.050119
Is to sin. UML 38° 30'	- - - - -		9.794150
So is MU 8.35	- - - - -		<u>0.921686</u>
To UL 5.83	- - - - -		<u>0.765955</u>


Therefore $IL = IU + UL = OM + UL = 45.45$, and from the similar triangles ILM and OMH , we have

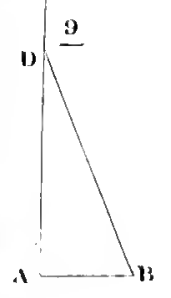
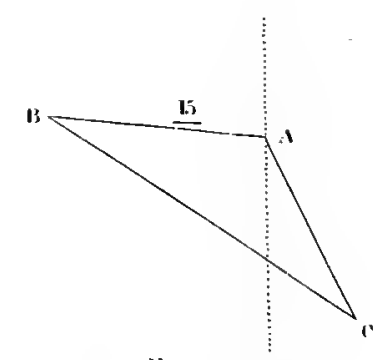
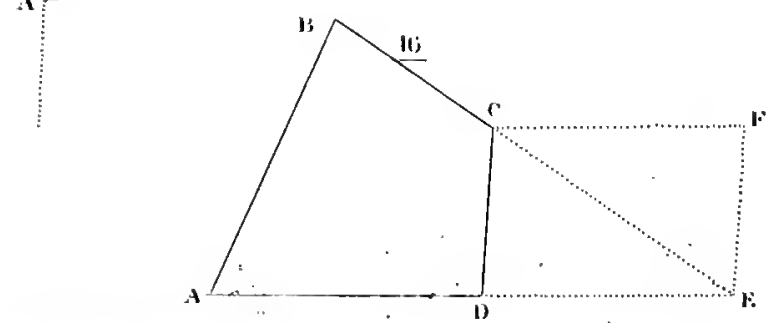
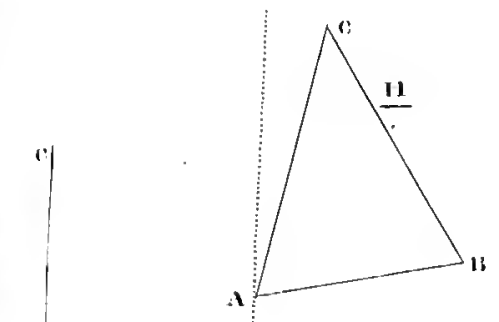
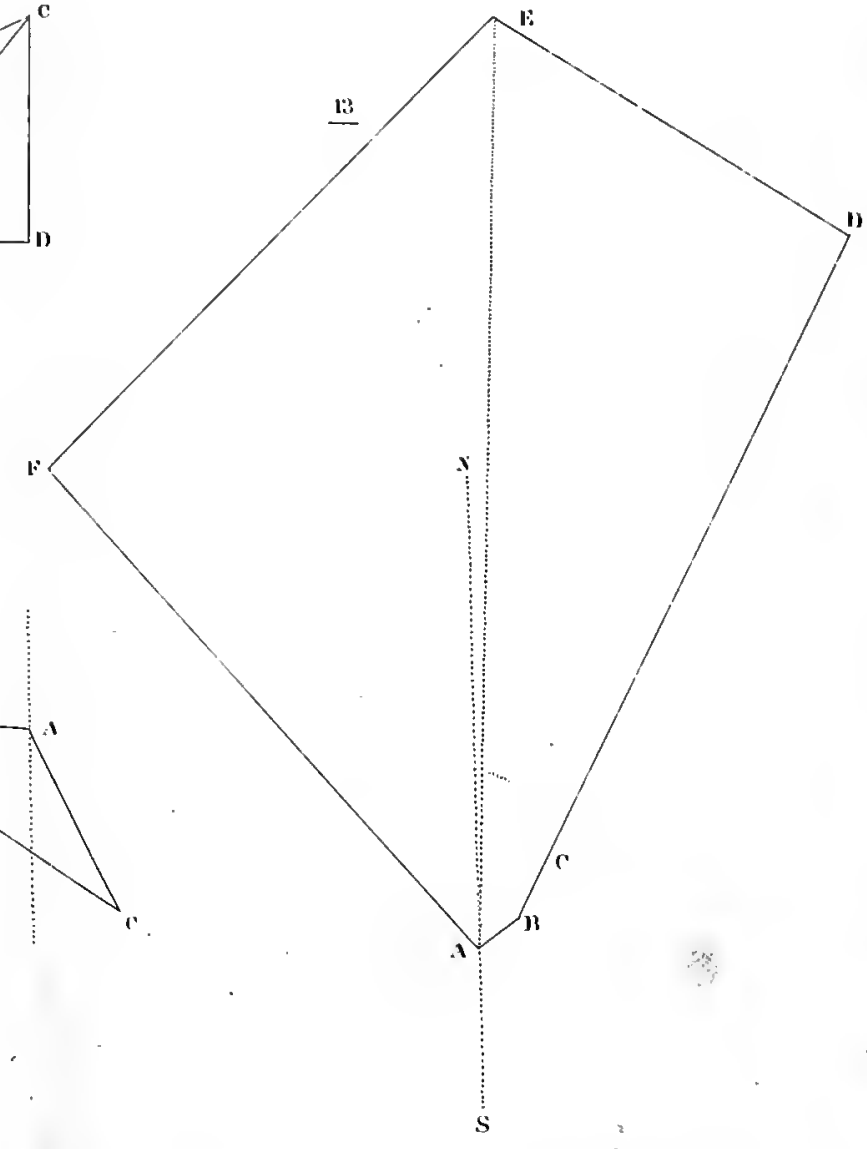
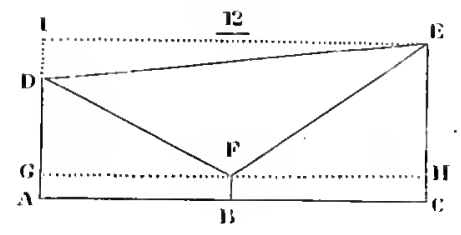
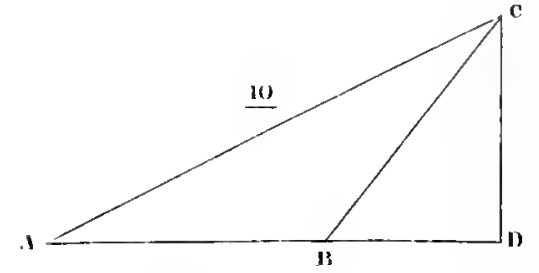
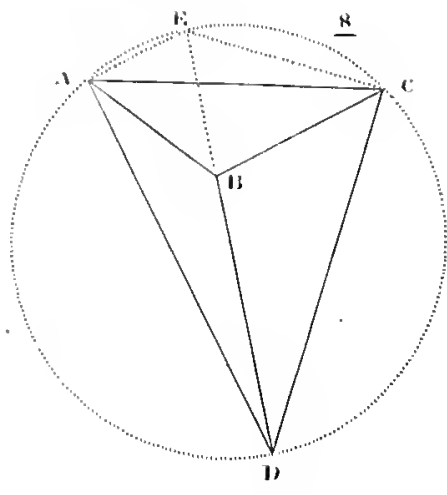
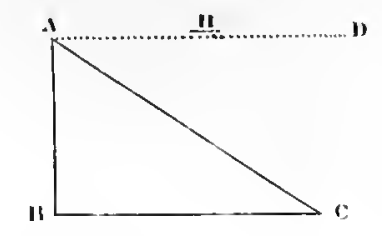
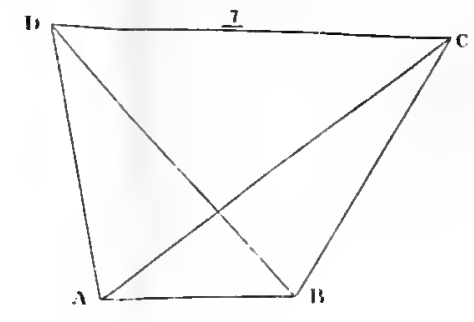
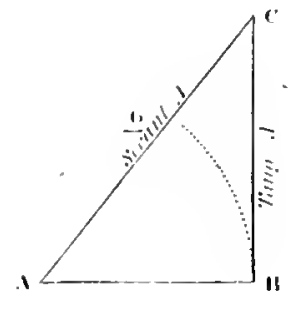
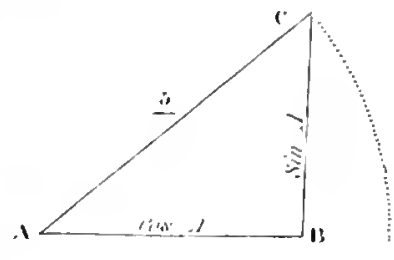
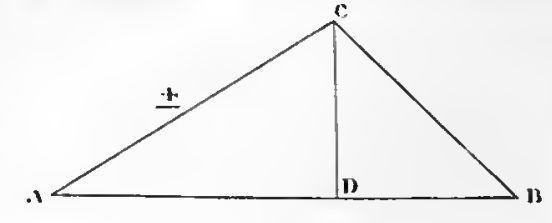
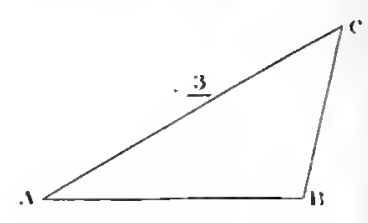
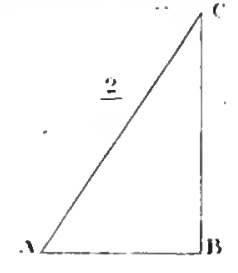
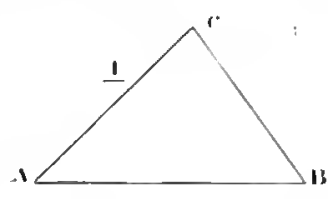
$$\text{As } IL (45.45) : LM (9.18) :: OM (39.62) : MH = 8.$$

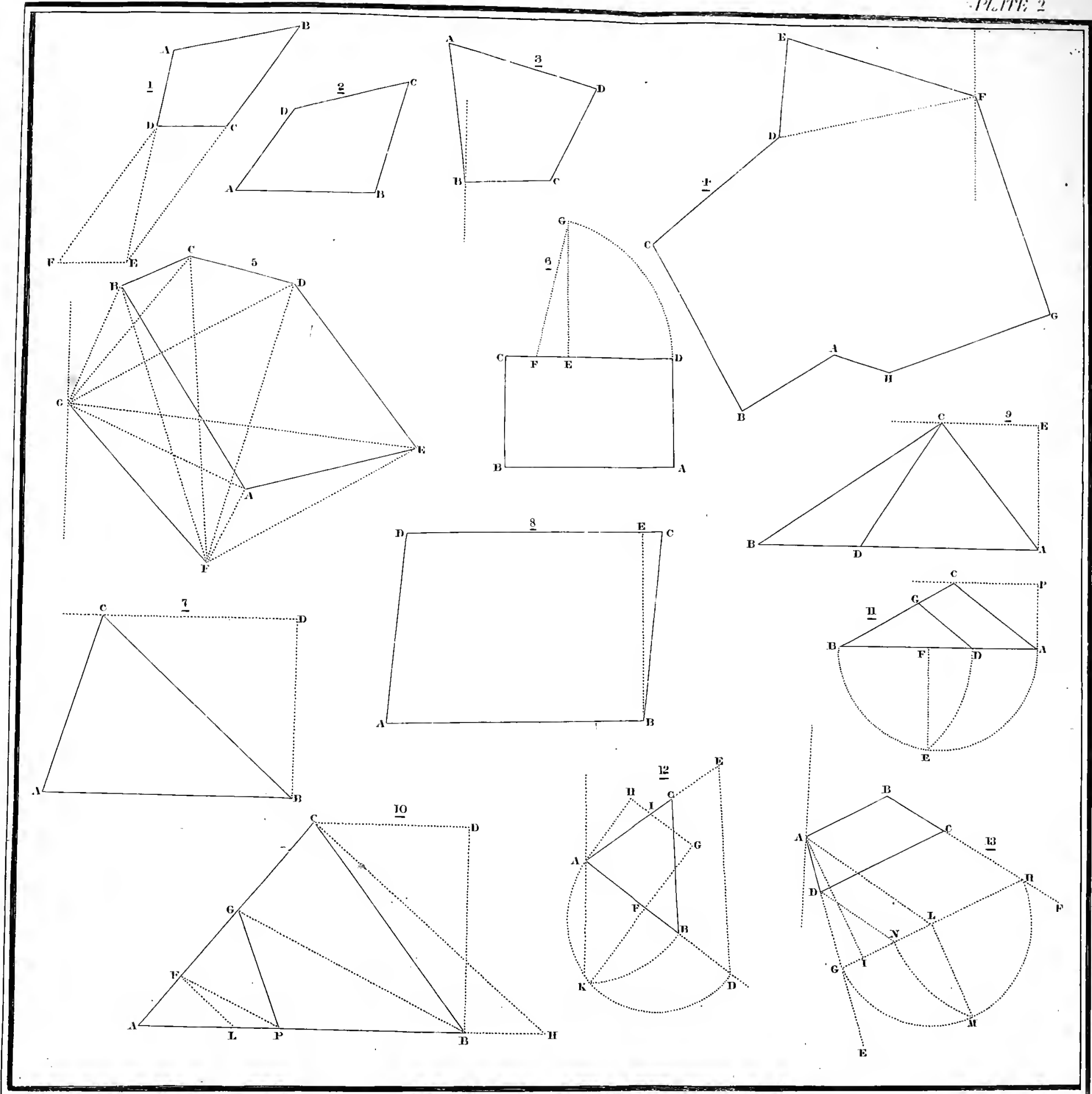
Now, in the triangle ILH , we have the angle $L = D$, and sides IL and $LH = LM + MH = 17.18$, to find the angle LIH ; thus,

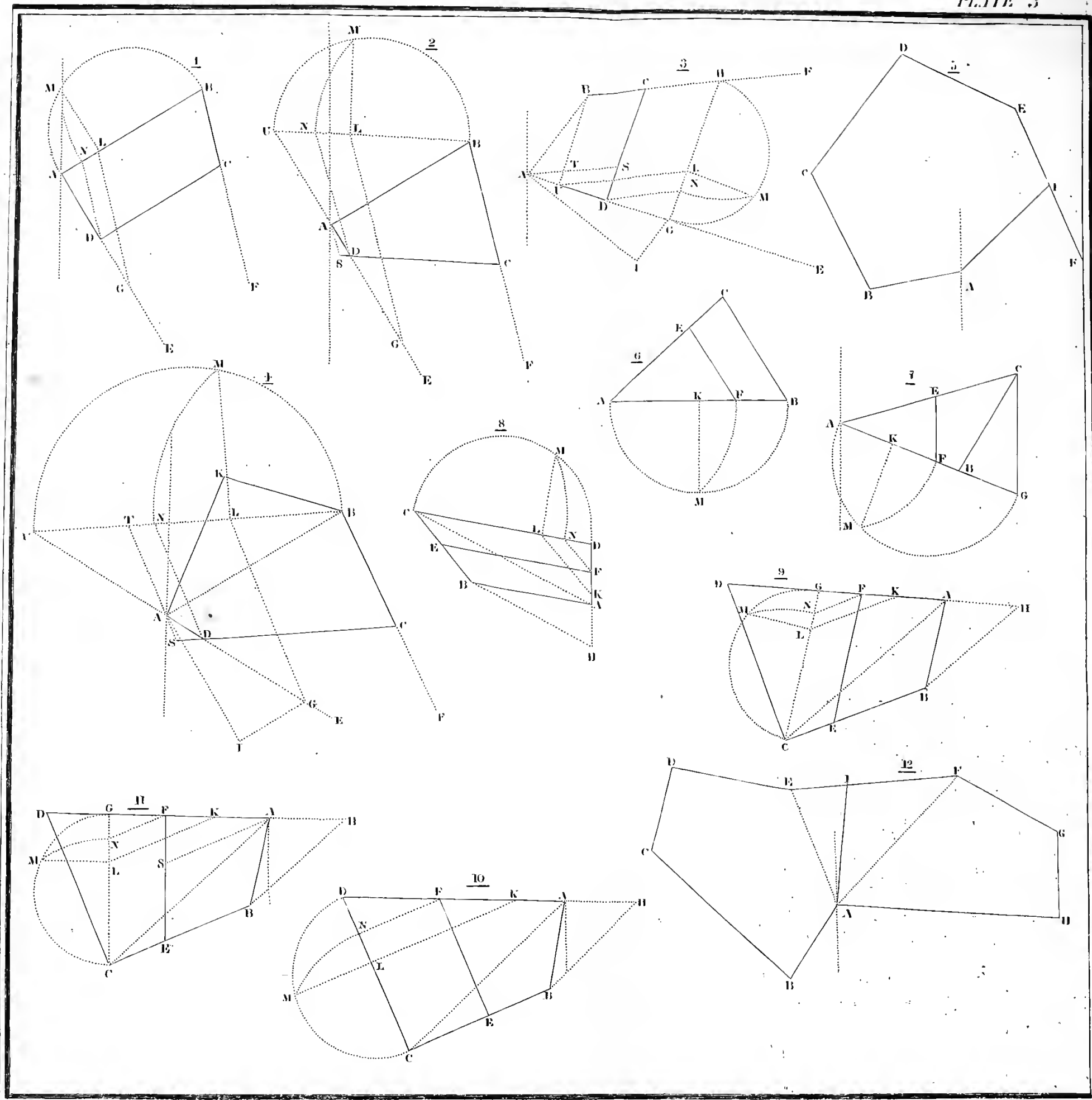
As $LI + LH$	62.63	- - - - -	Ar. Co.	8.203218
Is to $LI - LH$	28.27	- - - - -		1.451326
So is tang.	$\frac{LHI + LIH}{2}$	-	$58^\circ 30'$	- - - - - 10.212681
To tang.	$\frac{LHI - LIH}{2}$	-	<u>36 23</u>	- - - - - <u>9.867225</u>
	LIH	- - - - -	<u>22 7</u>	
	Bearing IL	- -	<u>66 15</u>	
	" IK	-	<u>S. 88 22 E.</u>	

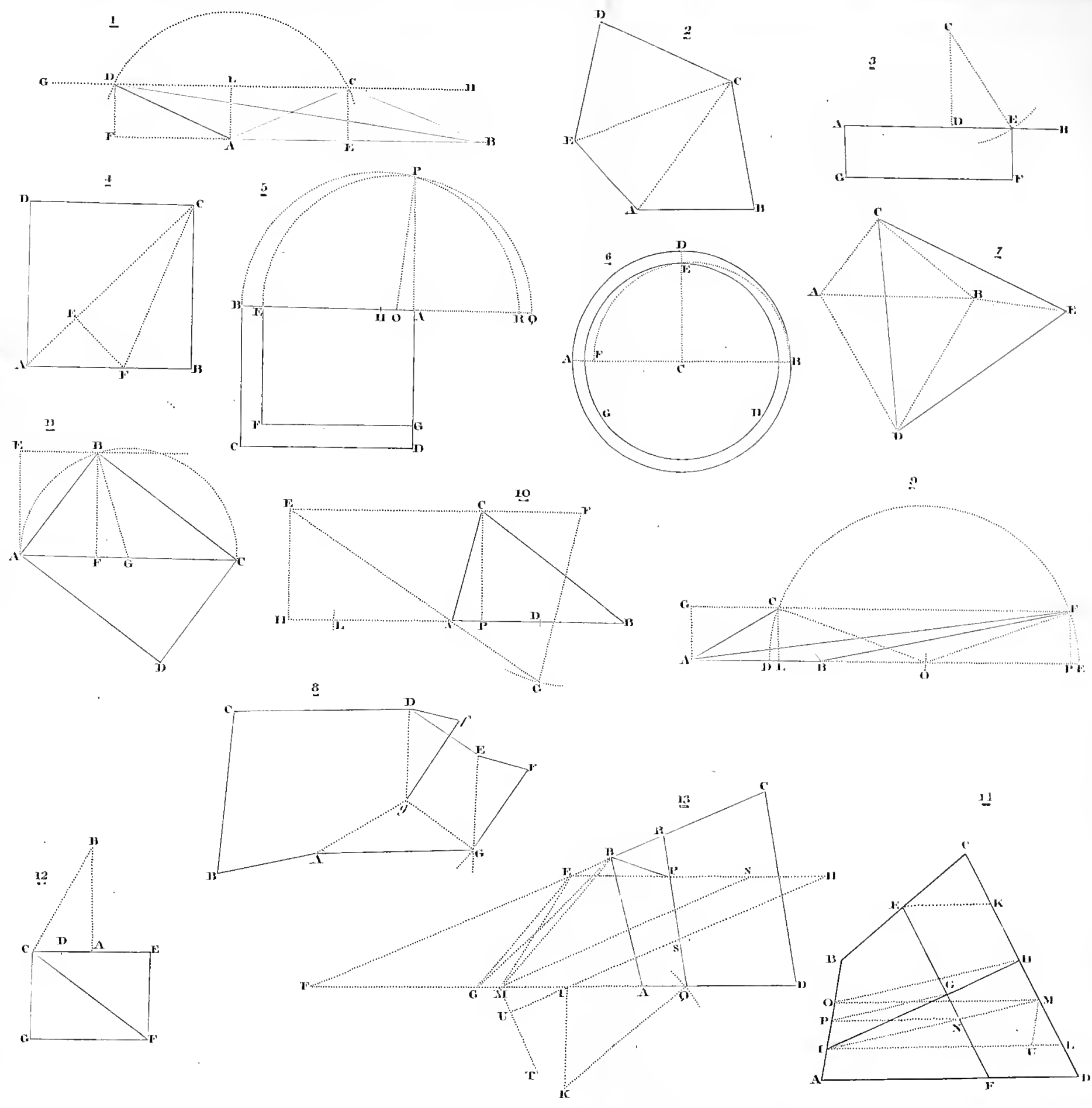



















LIBRARY OF CONGRESS



0 019 408 688 A